



Visual Fractions

Subtract the fractions and write your answer using fraction models. Shade the shape in your answer.



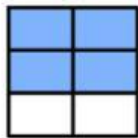
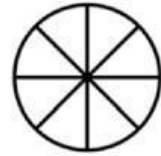
$$\frac{7}{8}$$

-



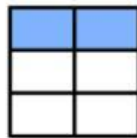
$$\frac{3}{8}$$

=



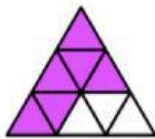
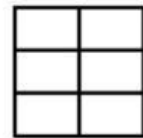
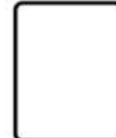
$$\frac{4}{6}$$

-



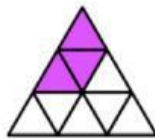
$$\frac{2}{6}$$

=



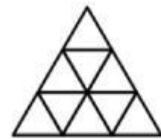
$$\frac{6}{9}$$

-



$$\frac{3}{9}$$

=




$$\frac{7}{8}$$

-



$$\frac{5}{8}$$

=



$$\frac{10}{12}$$

-



$$\frac{3}{12}$$

=

