





**Name** \_\_\_\_\_

## 2 Dimensional Shapes - Art Worksheet

**Instructions:** Write the number of sides that each shape has.




\_\_\_\_\_




\_\_\_\_\_



\_\_\_\_\_



\_\_\_\_\_



\_\_\_\_\_

