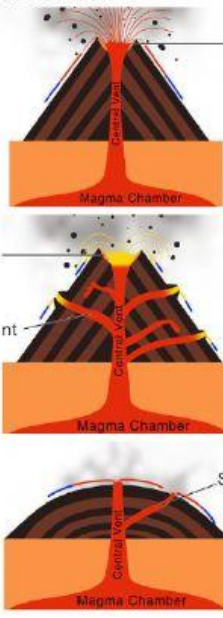
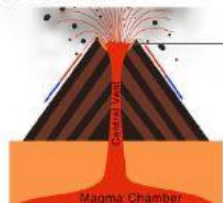
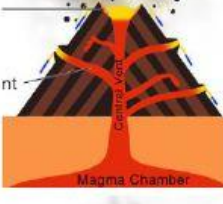
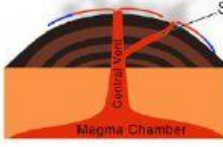


Types of Volcano

Name: _____

Composite Volcano	Shield Volcano	Cinder-Cone Volcano	Options
			<p>Match the picture. Write down the number.</p>  <p>1.  Magma Chamber</p> <p>2.  Magma Chamber</p> <p>3.  Magma Chamber</p>

Composite Volcano	Shield Volcano	Cinder-Cone Volcano	Options
			<ol style="list-style-type: none"> 1. Has wide and flat sides. 2. Has steep sides. 3. Has steep sides.
			<ol style="list-style-type: none"> 1. Lava bursts into the air. 2. Lava flows gently. 3. Lava can flow gently and violently.
			<ol style="list-style-type: none"> 1. Crater. 2. Crater. 3. No crater.