

KENDRIYA VIDYALAYA SANGATHAN MUMBAI REGION

LAT EXAM SET 1

CLASS - V

SUB – EVS

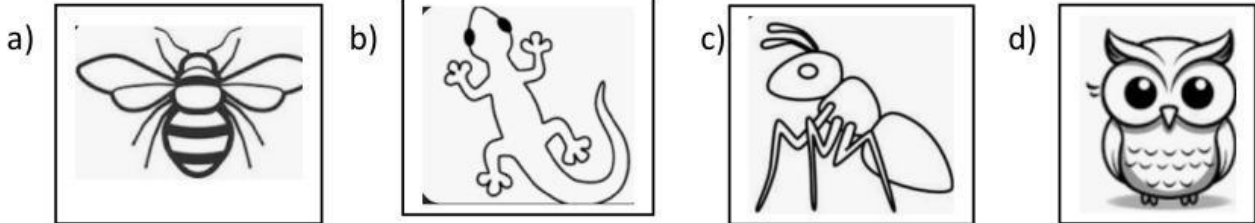
THEME -FAMILY AND FRIENDS

SUB – THEME – ANIMALS

CHAPTERS 1&2 – SUPER SENSES & A SNAKE CHARMER’S STORY

Q1) Who am I ?

I can turn my head around completely and see backward. In addition, I can rotate my head up to 270 degrees in either direction, which allows me to look behind them without turning my bodies.



Q2)) Choose which of the following option is for Tusks ?

- a)They are large visible teeth.
- b) They are large visible ears.
- c) They are large visible tongue.
- d) They are large eyes.

Q3)) Animals are worried about the person as he killed them .Find out who is he?


- a)Postman.
- b) Poachers.
- c) Plumber.
- d) Potter.

Q4) Kaziranga national park is in my state .Will you find out?


- a)Assam.
- b) Andhra Pradesh.
- c) Arunachal Pradesh.
- d) Andaman and nicobar.

Q5) Observe the given two groups of animals carefully. The best classification for these two groups would be:

Group 1



Group 2



- a) Group 1 - pet animals Group 2 - wild animals
- b) Group 1 - land animals Group 2 - water animals
- c) Group 1 - birds Group 2 - fish
- d) Group 1 - insects Group 2 - birds

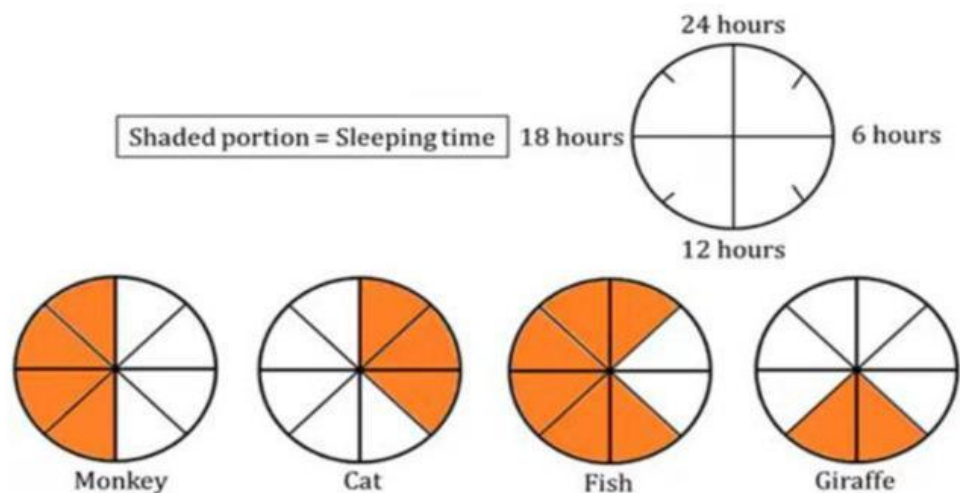
Q6) Which of these may be the footprints of a bird?

Option A	Option B	Option C	Option D

Q7) From where do fish in the sea get oxygen to breathe?

- a) Fish do not need oxygen to breathe.
- b) Fish get oxygen from the rain.
- c) Fish breathe the oxygen dissolved in water.
- d) Fish come up to the surface of the water to breathe.

Q8) The given 24-hour clocks show sleeping time of monkey, cat, fish and giraffe.




Monkey, cat, fish and giraffe sleep for how many a day respectively?

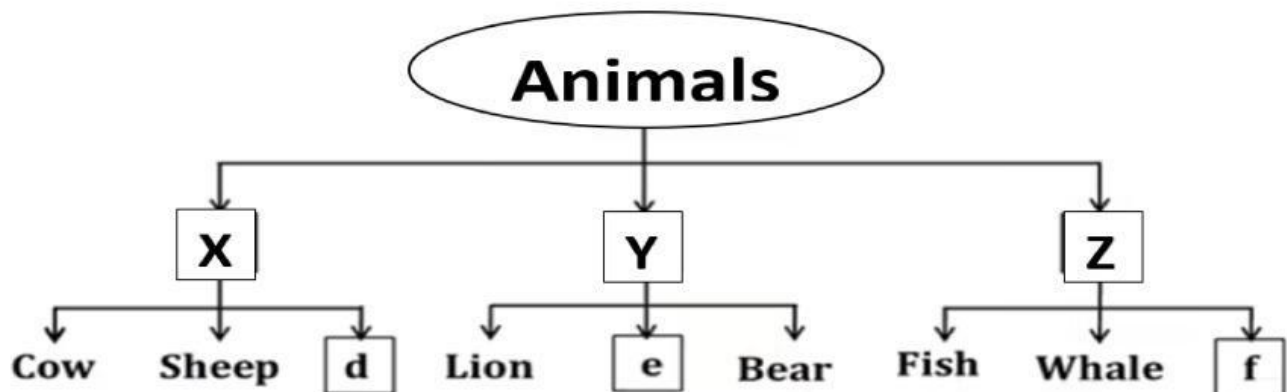
- a)12,6,8,2 b)4,3,6,2 c)1,4,8,12 d)12,9,18,6

Q9) Here is the picture of a camel. Rahul observes it and writes these points in his notebook. Which of these is NOT an OBSERVATION?

- a)A camel has a short tail.
b)A camel has long and well- padded legs.
c)A camel eats leaves of the neem tree.
d)A camel has a hump on its back.



10) Study the given flowchart showing the classification of animals on the basis of their uses.



What could be d, e and f ?

- | | | |
|--------------|------------|------------|
| a) d-BUFFALO | e-GOLDFISH | f-MONKEY |
| b) d-GOAT | e-TIGER | f-DOLPHIN |
| c) d-HORSE | e-CAMEL | f-ELEPHANT |
| d) d-LIZARD | e-HORSE | f-TURTLE |