











English Private School of Kalba SCIENCE - ASSESSMENT B REVISION PACK

Name: _____ Grade 1/Year 2 _____

Teachers: Ms. Connie, Ms. Shonima, Ms. Shemy





Unit - 3 Living and Growing

Q1. Match these animals to their habitats.

	○		○
	○		○
	○		○
	○		○
	○		○

Q2. Label and number the life cycle of a frog.

Froglet	Eggs	Adult frog	Tadpole
---------	------	------------	---------

<div style="border: 1px solid black; width: 40px; height: 40px; margin: 0 auto;"></div>	<div style="border: 1px solid black; width: 40px; height: 40px; margin: 0 auto;"></div>	<div style="border: 1px solid black; width: 40px; height: 40px; margin: 0 auto;"></div>	<div style="border: 1px solid black; width: 40px; height: 40px; margin: 0 auto;"></div>
			
_____	_____	_____	_____

Q3. Name the stages of the life cycle of a butterfly.


Caterpillar Butterfly Eggs Cocoon



Q4. A habitat is a special place where a plant or animal lives. Tick the things a habitat should have.



Q5. Number the life stages of human.



an elderly


a child

an adult

a baby

a teenager

Q6. Sort the fruits and vegetables from the below picture. Circle the fruits and cross out the vegetables.




Q7. Circle the healthy food and cross the unhealthy food below.




Q8. Read the questions carefully. Choose the correct answer.

1. Put check ✓ to the things that you will use to keep your teeth healthy.




2. Circle the things that are alive.





3. Label adult animals to their offspring from the words in the box.

foal calf spiderling baby lamb



Q9. Look at all these different foods. Write the plate number to sort the foods onto the correct plates below.



🍀💎👉💎 *Good Luck* 💎👉🍀🍀