






JIDHAFS TECHNICAL SCHOOL

MACHINE SHOP SECTION
3RD YEAR 2024-2025

Select the correct answer

1	The figure shows:	
a	Horizontal milling machine	
b	Cylindrical grinding machine	
c	Vertical milling machine	
d	Surface grinding machine	
2	Machine part (1) shown in the figure is	
a.	Coolant	
b.	Headstock	
c.	Tailstock	
d.	Grinding Wheel	
3	Work Holding method shown in the figure is:	
a	3 jaw chuck	
b	4 jaw chuck	
c	Between centers	
d	Machine Vice	