




Meaning of division

Grade 3 Division Worksheet

Divide the food between the kids. Circle the correct equation.



$9 \div 3 =$

$3 \times 3 =$

$9 \times 3 =$

$9 - 3 =$

How many bananas does each kid get? _____




$10 \div 2 =$

$10 \times 2 =$

$5 \times 2 =$

$10 - 2 =$

How many muffins does each kid get? _____




$6 + 2 =$

$8 \div 2 =$

$6 - 2 =$

$8 \div 4 =$

How many pretzels does each kid get? _____



$3 \times 6 =$

$12 \div 2 =$

$18 \div 2 =$

$18 - 6 =$

How many cherries does each kid get? _____