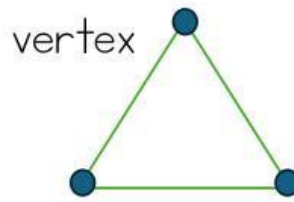
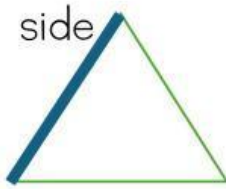



Grade 2


Math

3D shapes and Vertex



A square  has ____ sides and ____ vertexes.

A diamond  has ____ sides and ____ vertexes.

A hexagon  has ____ sides and ____ vertexes.

Match the names with the shapes.

triangle



hexagon



rectangle



oval



diamond



trapezoid

