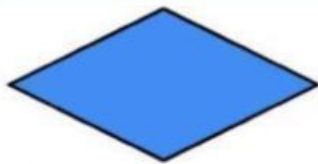


My name is: _____

WORKSHEETDate:
PPD – A4

Teacher's feedbacks

Task 1: Listen and choose the correct pictures (Nghe và chọn đáp án đúng)

1. How many sides does the diamond have?

1

2

3

4




2. How many sides does the star have?

7

10

9

8




3. How many sides does the triangle have?

1

2

3

4



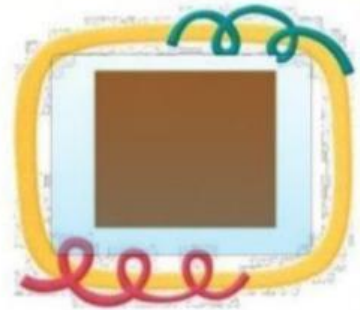
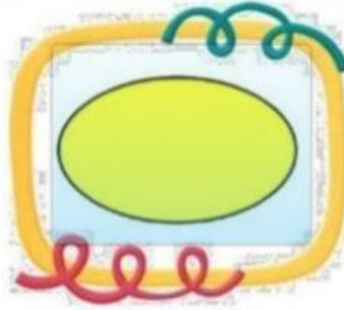


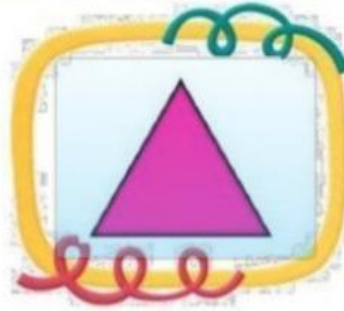

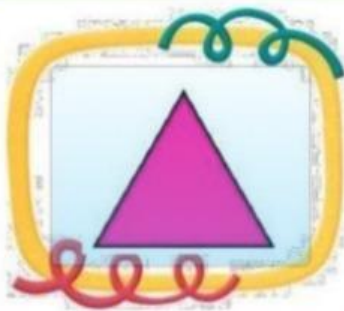
4. How many sides does the square have?

1

2

3

4

Task 2: Listen and choose the correct pictures (Nghe và chọn bức tranh đúng)**Number 1****Number 2****Number 3****Number 4**