

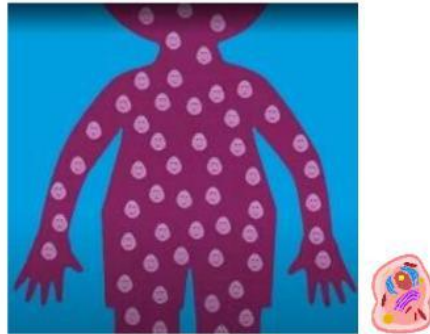
 <b>EFQM</b> <small>VALIDATED BY EFQM 2023</small>	<b>ACTIVITY</b>		<b>SEMINARIO DIOCESANO DE CRISTO SACERDOTE DIÓCESIS DE PALMIRA</b> 
	<b>ASIGNATURA: Science</b>		
	<b>ESTUDIANTE:</b>	<b>GRADO: 4°</b>	

Choose the correct answer.

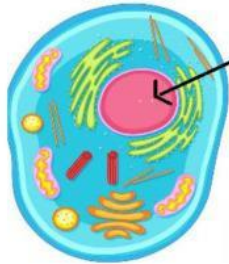


1- What is a cell?



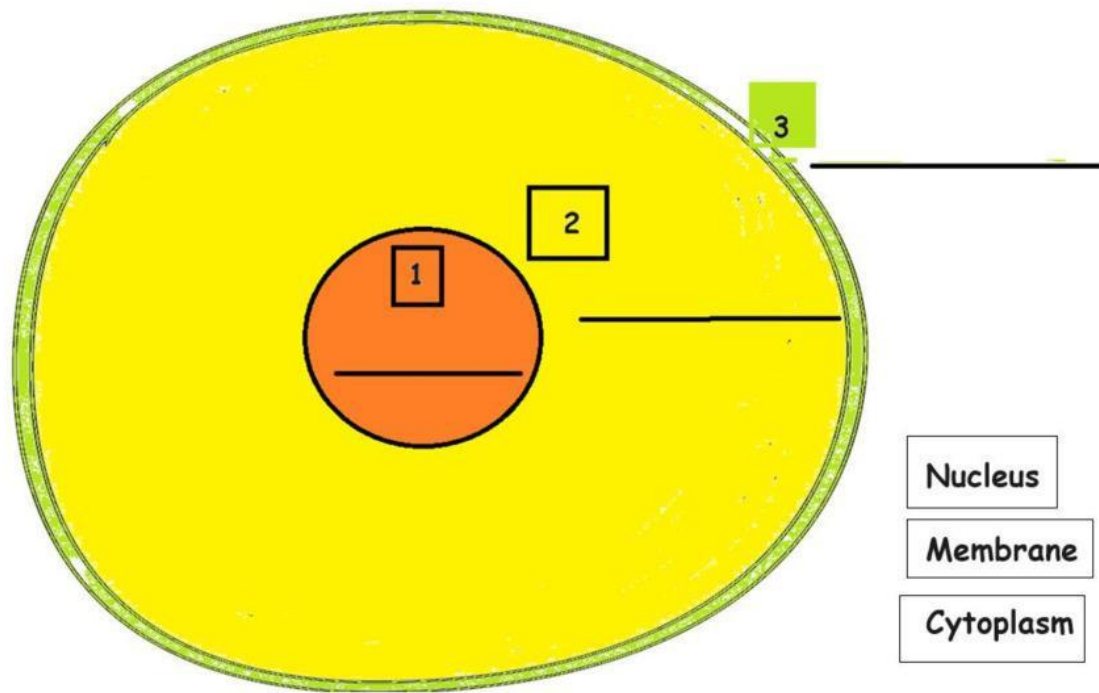
- a. The smallest unit of life
- b. A type of food
- c. A big animal

2- What part controls all functions of the cell?

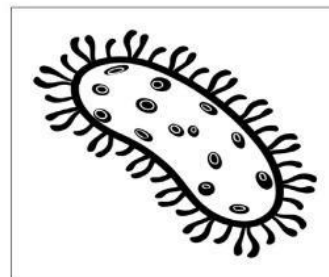



- a. The cytoplasm
- b. The nucleus
- c. The membrane

3- Drag and drop the cell parts: membrane, nucleus, and cytoplasm to the right places.



4. Drag and drop **unicellular** organism and a **multicellular** organism. Then clic in the link.



Unicellular organism	Multicellular organism

5. Match the following terms to their descriptions:



Join

TERMS	DESCRIPTIONS
Membrane ●	● Controls the function of the cell
Nucleus ●	● Space between the nucleus and membrane
Cytoplasm ●	● Protects the cell and separates it from the outside