

Fill in the box with '+' (plus), '-' (subtract), 'x' (multiple), '÷' (divide) :

1.

$24 \square 8 = 3$

2.

$6 \square 4 = 10$

3.

$3 \square 0 = 0$

4.

$3 \square 6 = 18$

5.

$15 \square 8 = 23$

6.

$9 \square 5 = 4$

7.

Mayank is 35 years old. How old was he 10 years ago?

8.

Asha is 13 years old. How old will she be after 9 years?

Complete the sequence :

9.

A : B

C : D

E : F

G :

10.

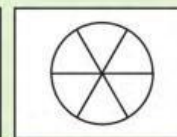
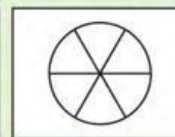
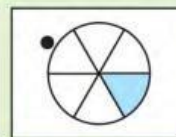
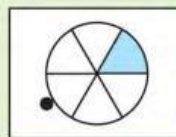
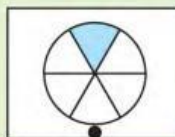
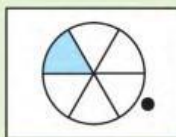
EF : FG

GH : HI

IJ : JK

KL :


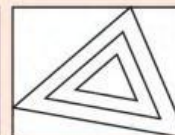



11.



(A)

(B)

12.



(A)

(B)