

Name : _____

Class : _____

GEOMETRY

Classifying Triangle by their Angles

An **acute triangle** has three acute angles.



A **right triangle** has one right angle.



An **obtuse triangle** has one obtuse angle.



Classify the Triangles.

(Acute / right / obtuse)

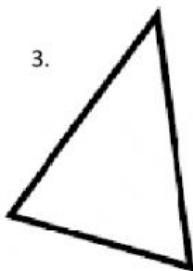
1.



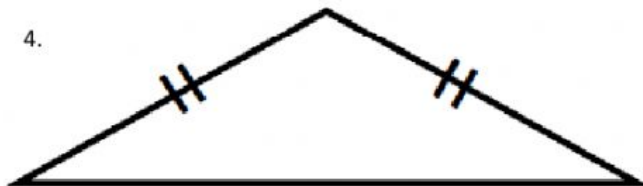
2.



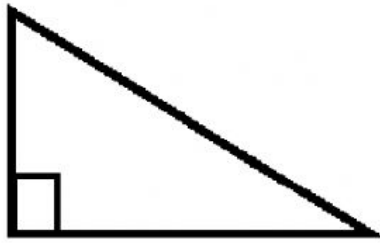
3.



4.



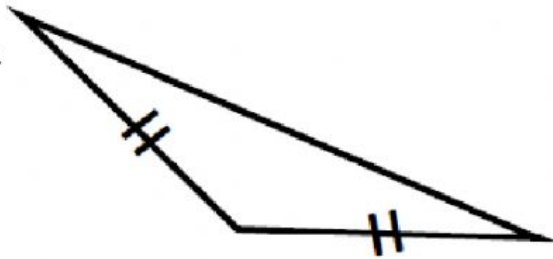
5.



6.



7.



Stay safe and healthy