

Name: \_\_\_\_\_

# April Daily Math #2

## SOLVE, THEN COLOR



EVEN



ODD

$$q + q =$$

$$6 + 3 =$$

$$5 + 6 =$$




## MONEY

Use 4 coins to make...

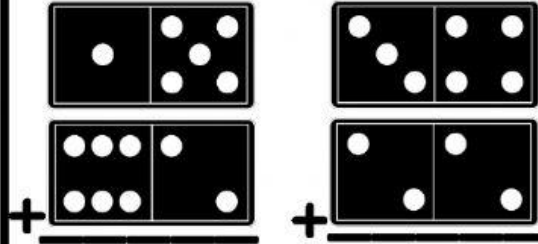
## NUMBER BONDS

Fill in the missing number.



## DOMINO ADDITION

Add the columns below.

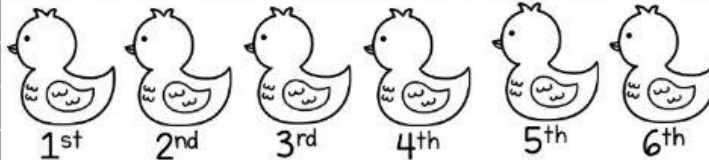


## ADDITION

+ 2	
5	
9	
6	
4	
8	

## ORDINAL NUMBERS

Follow the directions.



1. COLOR THE THIRD DUCK YELLOW.
2. PUT AN X ON THE FOURTH DUCK.
3. CIRCLE THE SIXTH DUCK.
4. COLOR THE FIRST DUCK ORANGE.

## SUBTRACTION

$\begin{array}{r} 77 \\ - 40 \\ \hline \end{array}$	$\begin{array}{r} 86 \\ - 25 \\ \hline \end{array}$
---	---

Created by Teaching Second Grade