



Name: _____


Date: _____


APPLE MATH


ทำแบบฝึกหัดให้และเขียนคำตอบในแอปเปิ้ล


$7+1=$ 


$1+2=$ 


$5+3=$ 


$6+2=$ 


$2+0=$ 


$3+4=$ 


$5+0=$ 


$3+1=$ 


$5+2=$ 


$9+0=$ 


$4+4=$ 


$3+4=$ 


$2+4=$ 


$5+5=$ 


$1+3=$ 

$3+1=$ 

$4+6=$ 

$3+4=$ 

$2+6=$ 

$3+3=$ 

$2+6=$ 