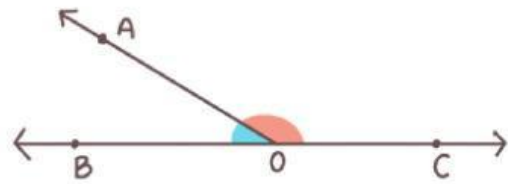


Name : _____

Class : _____

SUPPLEMENTARY ANGLES

Two angles are called supplementary when their sum adds up to 180 degrees.

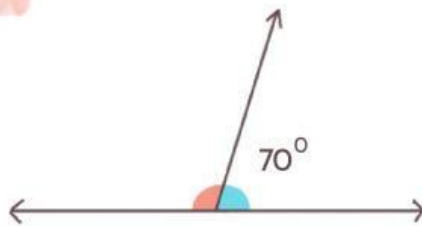


$$\angle BOA + \angle AOC = 180^\circ$$

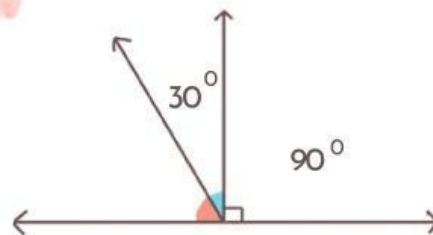
EXERCISE

Find the value of the missing angles!

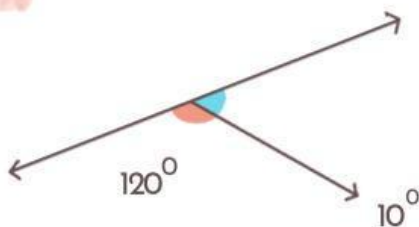
1



2



3



4

