



?

HOW MANY LEGS?




?

COUNT & CALCULATE



?



?

⊕ + ⊕ + ⊕ + ⊕ = ⊕

0 1 2 3 4 5 6 7 8 9 + -

10 11 12 13 14 15 16 17 18 19 20 =

⊕ + ⊕ + ⊕ + ⊕ = 15