



# Codingal


Where kids love coding

## NAME THAT POLYGON!

Can you name these polygons according to the number of their sides?




Four sides




Five sides




Six sides



Seven sides



Eight sides



Nine sides