









Book 1 – The Magic Science Museum

Worksheet 2a

Date: _____
()

Read the numbers in the boxes below. Look at the number on the cars. Move each car to the correct space.

	<div>ninth</div> <div></div>	<div>second</div> <div></div>	
			
	<div>fourth</div> <div></div>	<div>eighth</div> <div>  </div>	
			
	<div>first</div> <div></div>	<div>seventh</div> <div></div>	
	<div>tenth</div> <div></div>	<div>third</div> <div></div>	
			
	<div>sixth</div> <div>  </div>	<div>fifth</div> <div></div>	