

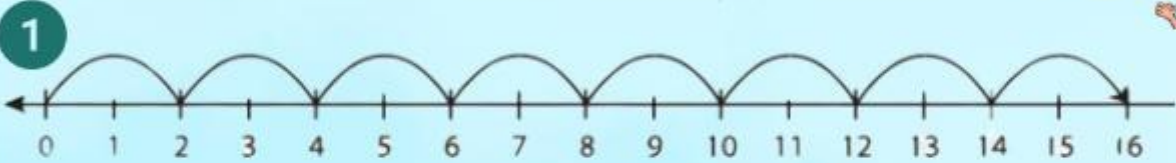
NAMA MURID : _____

2.3 DARAB DALAM LINGKUNGAN 10 000

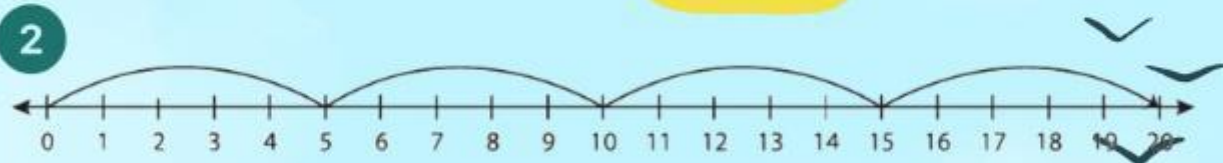
2.3.1 Menyelesaikan ayat matematik darab bagi sebarang nombor hingga empat digit dengan nombor satu digit, 10, 100, dan 1000.



Tuliskan ayat matematik berdasarkan garis nombor :



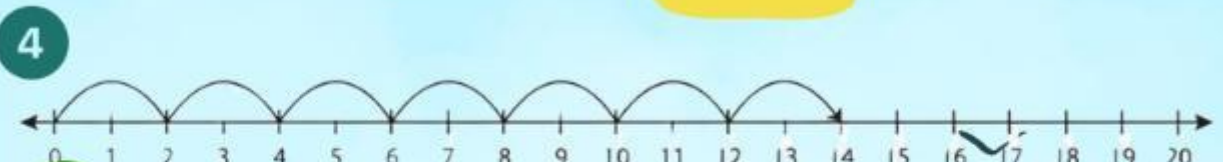
$$8 \times 2 = \text{[]}$$



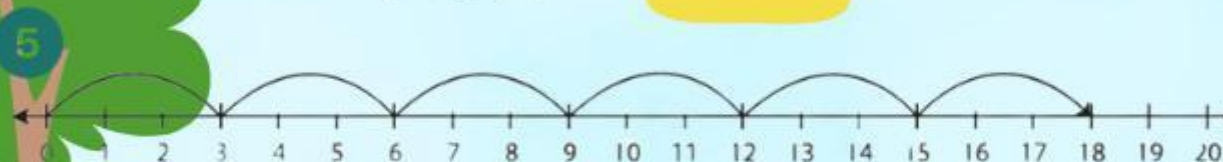
$$4 \times 5 = \text{[]}$$



$$2 \times 6 = \text{[]}$$



$$7 \times 2 = \text{[]}$$



$$6 \times 3 = \text{[]}$$

