

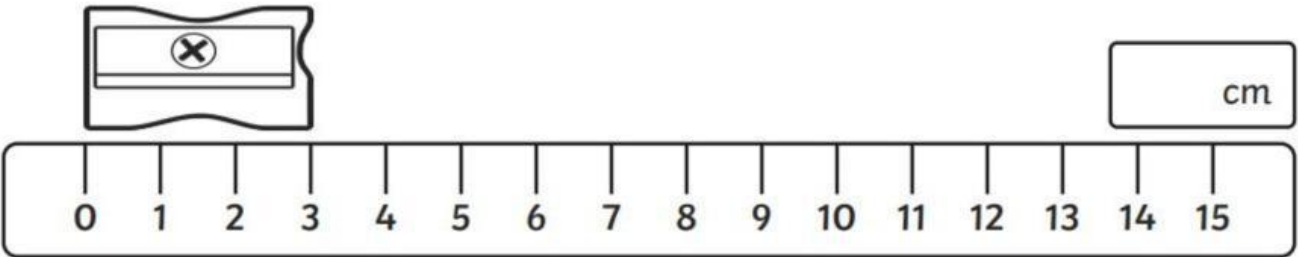
Name: _____

Date:

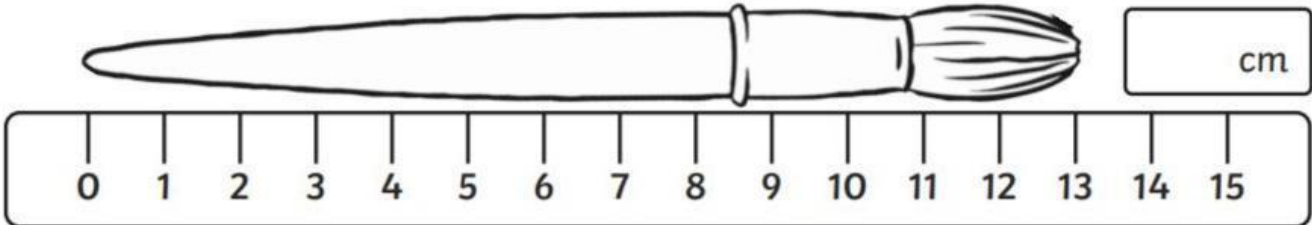
		--			--		
--	--	----	--	--	----	--	--

Instructions:
Identify the length of the objects.

1.



2.



Instructions:

Identify the length and unit of the objects.

Question 3: What is the reading on the ruler?



7.9cm

8.9cm

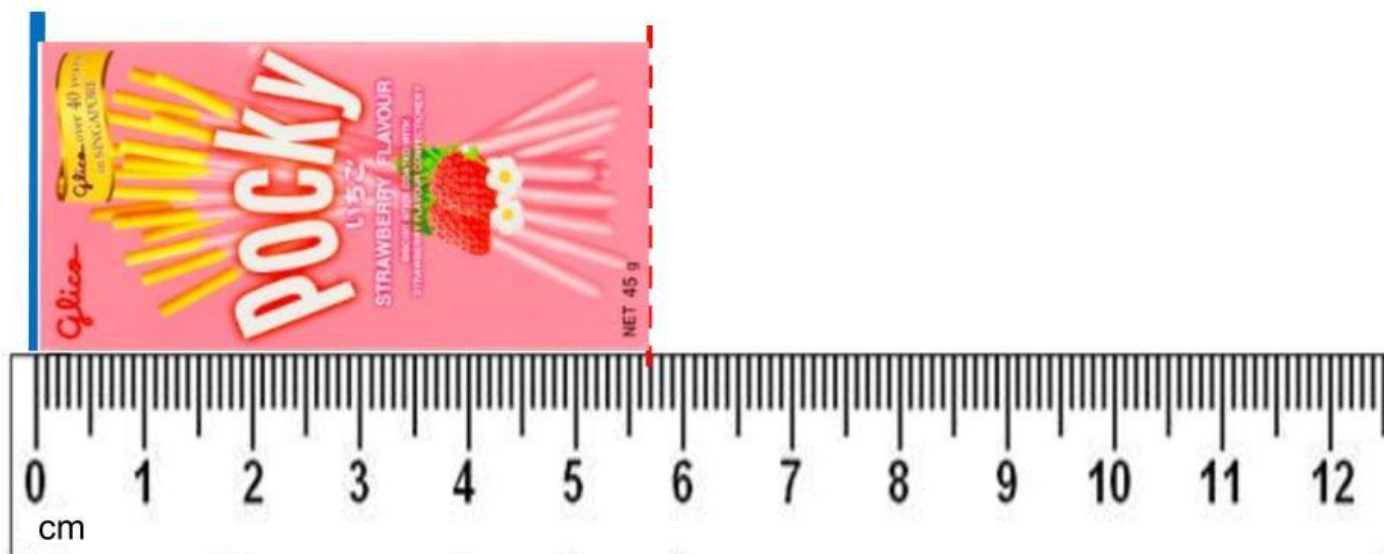
Question 4: What is the reading on the ruler?



8.4cm

7.2cm

Question 5: What is the reading on the ruler?



5.7cm

6.4cm

Question 6: What is the reading on the ruler?



9.8cm

8.6cm

Question 7: What is the reading on the ruler?



10.2cm

11.6cm

Question 8: What is the reading on the ruler?



12.7cm

11.2cm