

Name: _____



Drag the number



Drag the number represented by each of the following
on the space provided.

$$600 + 20 + 9 = \boxed{}$$

$$900 + 50 + 8 = \boxed{}$$

$$800 + 40 + 7 = \boxed{}$$

$$400 + 90 + 0 = \boxed{}$$

$$200 + 0 + 1 = \boxed{}$$

847

958

490

629

201

SKIP COUNTING

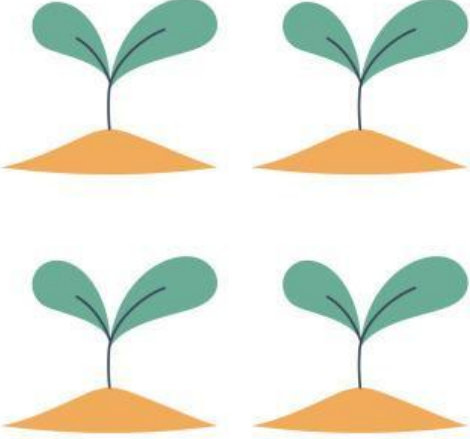
Practice writing your numbers to 20.
Circle every second number starting at 2:

Fill in the missing numbers as you skip count by 2's:

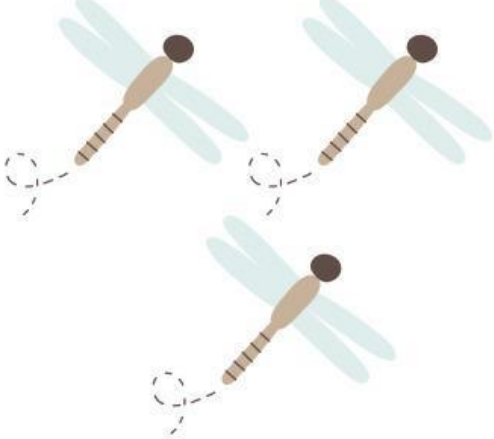
2		6		10
12	14		18	20
	24		28	
32			38	40
42		46		50

Check the number


How many elements do you count?




3 2 4 1



1 5 3 7



7 8 9 6



5 4 6 9

NUMBERS WORD SEARCH



Can you find the words hidden in the puzzle?

R	S	G	T	W	E	L	V	E	I	T	A
B	H	E	E	M	I	O	K	P	V	A	S
D	X	E	V	A	S	I	X	O	O	L	D
E	O	H	L	E	T	C	C	E	N	A	T
L	T	N	C	O	N	E	I	T	E	D	H
E	I	I	C	T	W	E	M	O	T	K	R
V	R	N	S	E	A	F	I	V	E	S	E
E	C	E	H	N	V	A	A	V	G	F	E
N	U	W	V	E	C	F	E	C	R	L	A
B	O	T	W	O	L	K	O	O	T	U	M
B	V	T	E	P	L	C	H	U	E	P	N
E	E	I	G	H	T	I	R	E	R	F	R

ONE

FOUR

SEVEN

TEN

TWO

FIVE

EIGHT

ELEVEN

THREE

SIX

NINE

TWELVE

MATCH THE NUMBER

Draw a line to match the number to its name.

11 •

68 •

32 •

70 •

5 •

27 •

61 •

95 •

55 •

• Sixty One

• Thirty two

• Fifty Five

• Sixty Eight

• Ninety Five

• Eleven

• Five

• Twenty Seven

• Seventy

What's the Number?

Answer the number puzzle by writing the correct digit in each place value.

	Thousands	Hundreds	Tens	Ones
I am a two-digit number. My ones digit is 4. My tens digit is 8. What number am I?				
I am a three-digit number. My tens digit is 9. My hundreds digit is 8. My ones digit is 4. What number am I?				
I am a three-digit number. My hundreds digit is 8. My ones digit is 5. My tens digit is 9. What number am I?				
I am a four-digit number. My ones digit is 4. My tens digit is 8. My thousands digit is 3. My hundreds digit is 5. What number am I?				
I am a four-digit number. My hundreds digit is 6. My thousands digit is 5. My ones digit is 2. My tens digit is 8. What number am I?				