







Animal Comparatives and Superlatives

Where are the Animals? Follow the directions to figure out where each of the animals belongs.

					
Tiger	Sheep	Chicken	Fish	Hippo	Horse
Height (cm) 91	Height (cm) 85	Height (cm) 60	Height (cm) 10	Height (cm) 140	Height (cm) 120
Length (cm) 270	Length (cm) 190	Length (cm) 30	Length (cm) 70	Length (cm) 330	Length (cm) 110
Weight (kg) 230	Weight (kg) 130	Weight (kg) 5	Weight (kg) 22	Weight (kg) 2,200	Weight (kg) 90
Speed (km/h) 56	Speed (km/h) 35	Speed (km/h) 14	Speed (km/h) 24	Speed (km/h) 30	Speed (km/h) 52
Age 14	Age 10	Age 6	Age 9	Age 20	Age 26



Directions:

- The heaviest (kg) animal is in the smallest cage.
- The youngest animal is in the biggest cage.
- The fastest animal is in cage number one.
- The shortest animal (height) is in cage number four.
- The sheep is between the fish and the giraffe.
- The oldest animal is in cage number two.

Answers:

1. The _____ is in cage number one.
2. The _____.
3. The _____.
4. The _____.
5. The _____.
6. The _____.

Zoo:

1.	4.
2.	5.
	
3.	6.