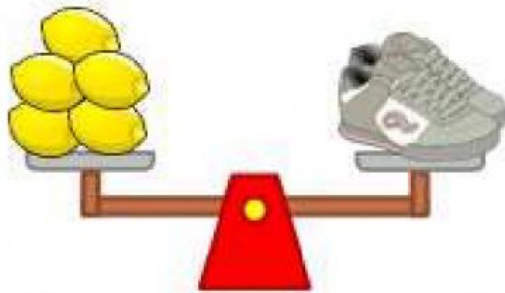
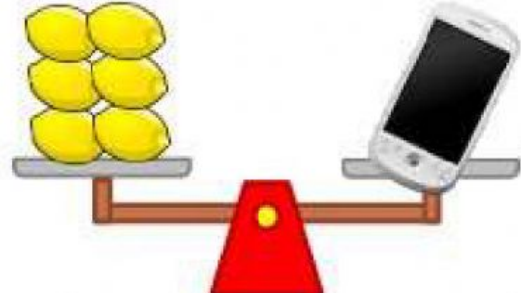


How Much does it Weigh?

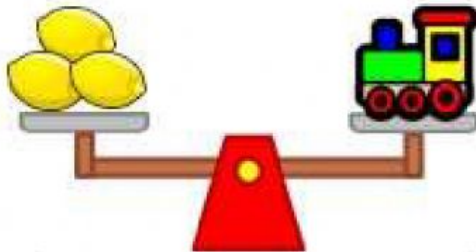
Look at each balancing scale and measure how much each object weighs. Write your answer on the line.



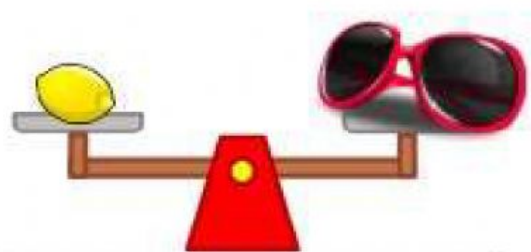
The weight of the shoes in lemons is _____.



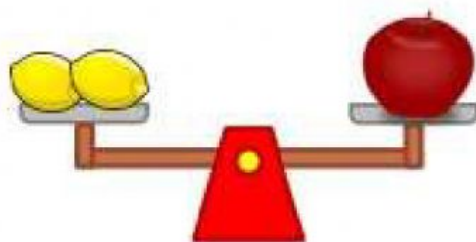
The weight of the phone in lemons is _____.



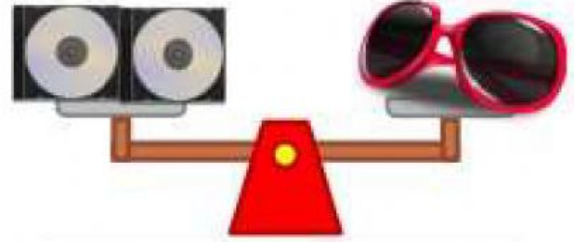
The weight of the toy train in lemons is _____.



The weight of the sunglasses in lemons is _____.



The weight of the apple in lemons is _____.



The weight of the sunglasses in CDs is _____.

Which one heavier: toy train or phone?
