

TRƯỜNG TIỂU HỌC TRI THỨC

Họ và tên

Lớp

Đề 1

**ĐỀ THI TUYỂN LỚP SONG NGỮ
KHỐI 2**

Năm học: 2024-2025

Thời gian: 60 phút

Listening (30 pts)	Speaking (20 pts)	Reading&Writing (50 pts)	TOTAL	REMARK

LISTENING

Question 1 : Listen and circle

1.



2.



3.



4.



Question 2: Listen and draw lines



1

2

3

4

Question 3: Listen and put a tick (✓)

1.

I'm four

I'm six

2.

This is my father

This is my mother

3.

I like fish

I don't like fish

4.

I'm happy

I'm sad

READING & WRITING

Question 1: Look and write

1.



f_urteen

2.



he__rt



Question 2: Reorder

1. have - I - pencils - three

.....

2. don't - I - like - candy

.....

3. is - riding - He - a bike

.....

4. name - your - What - is

.....?

Question 3: Look, read and circle a, b or c

1. How old are you?

a. I'm seven

b. My name's Nam

c. I'm fine

d. I'm happy

2. I like _____



a. candy

b. rice

c. pasta

d. tea

3. There are _____pencils



- a. twelve b. thirteen c. twenty d. eleven

4. What shape is this?



- a. triangle b. square c. circle d. rectangle

Question 4: Read and circle

1. **grandfather**




2. **six**



3. **popcorn**



4. **square**






Question 5: Read and put a tick (✓) or cross (×)

1. **3** I'm two

2.  I like chicken

3.  I can see a pig

4.  This is a kite

MATH IN ENGLISH

Question 1: Read and put a tick (✓) or a cross (×)

0. It's seven



1. It's four



2. It's two



3. three books



4. eleven stars



5. nine flowers



Question 2: Look, read and circle a, b or c

1. $10 + 4 = ?$

a. eleven

b. thirteen

c. fourteen

d. twelve

2. $16 \dots\dots\dots 8 = 8$

a. is equal to

b. is greater than

c. minus

d. plus

3. $81 \dots\dots\dots 91$

a. is equal to

b. is greater than

c. is less than

d. equals

4. fourteen plus three equals.....

a. sixteen

b. eleven

c. seventeen

d. twelve

5. fifteen minus four equals.....

- a. 11 b. 19 c. 10 d. 18

6. minus seven equals thirteen

- a. fourteen b. nineteen c. twenty d. twelve

7. $18 - 6 = ?$

- a. twenty b. twelve c. eleven d. thirteen

8. $8 + 7 = ?$

- a. fifteen b. fourteen c. eleven d. twelve

9. seventeen is greater than.....

- a. thirteen b. seventeen c. nineteen d. twenty

10. 40 is 40

- a. equal to b. greater than c. less than d. equals

Question 3: Read and write

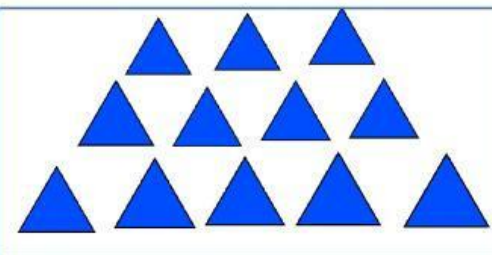
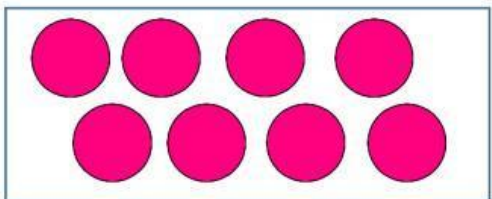

Van has 8 green apples , Nam has 9 green apples .

How many green apples in all?

$$\square \bigcirc \square = \square$$

There are green apples in all.

Question 4: Count, match and say



7

twelve

10

eight

12

ten

8

seven

Question 5: Read and write

Linh has 17 bananas. Linh eats 5 bananas and Linh gives Hoa 3 bananas .

How many bananas does Linh have left ?

$$\square \bigcirc \square \bigcirc \square = \square$$

There are.....bananas left