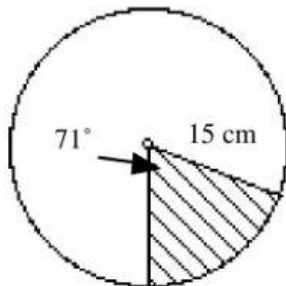


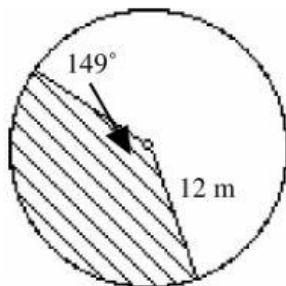
7.6 Arc Length and Sector Area Worksheet

Find the length of the indicated arc, to the nearest tenth.

1.

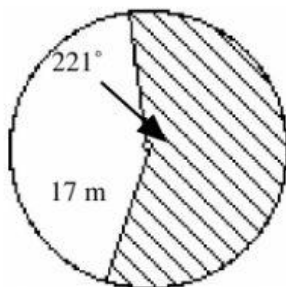


2.



Find the area of the indicated sector, to the nearest tenth.

3.



4.

