
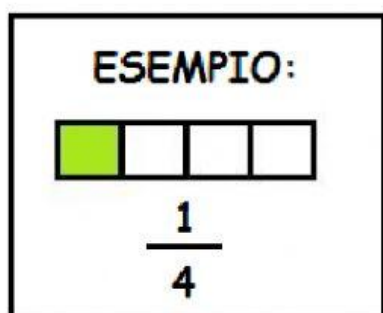
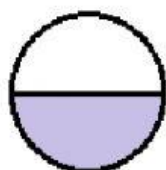


OSSERVA LE PARTI COLORATE IN OGNI FIGURA E COMPLETA LE FRAZIONI SCRIVENDO IL GIUSTO DENOMINATORE.




$\frac{1}{\quad}$




$\frac{1}{\quad}$




$\frac{1}{\quad}$



$\frac{1}{\quad}$



$\frac{1}{\quad}$



$\frac{1}{\quad}$



$\frac{1}{\quad}$



$\frac{1}{\quad}$