

NAME :



DATE:

GRADE :



SUBJECT :

Word Problems



- 1) Tom has 3 yellow pencils and 2 red pencils. How many pencils does he have?


$$\square + \square = \square$$

- 2) There are 4 roses and 2 sunflowers in my garden. How many flowers are there in all?


$$\square + \square = \square$$

- 3) 5 boys were playing in the playground. 3 girls also join in. How many kids are there?


$$\square + \square = \square$$