





style="width:100%">

Preview:

I. Match the 3D shapes to their names.

1. 	a. CUBE
2. 	b. CONE
3. 	c. SPHERE
4. 	d. CYLINDER

II. Fill in the blanks.

Drag & drop the correct answers from the helping box given below.

Cone

2 flat faces

Cube

Sphere

a. Cylinder has _____ & 1 curved face.

b. _____ has 6 faces / sides.

c. _____ has 1 curved face.

d. _____ has 1 curved face & 1 flat face.

LIVEWORKSHEETS



FINISH!

3 D shapes. an interactive worksheet by Shabba

Tar
live



Do This For 15 Minute
And Earn ₹292,000 A
Day

Bitcoin Bank

