



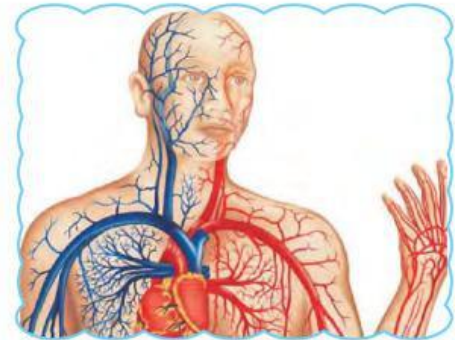
Our body is a wonderful machine. It performs various functions with the help of its different organ systems. Each organ system consists of many cells and tissues.

Here, some pictures and hints are given below related to our body system. Identify them and write their name :



1

This system carry messages to and from the brain and spinal cord to various body parts.



3

The primary function of this system is to break down the food.



5

This system enables our body to move using muscles.



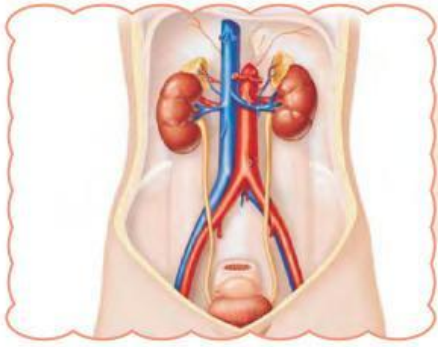
4

The system, which defends the body against pathogenic viruses.

**BOOST UP**



Our eyeballs remain the same size from birth to death, but our nose and ears continue to grow.



6

This system helps in the elimination of (excrete) the waste materials of our body.



8

This system includes lungs and the trachea that bring air into the body.

7

This system provides shape to our body with the help of bones. In other words, it is a framework of bones.

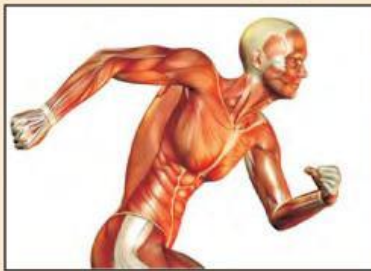




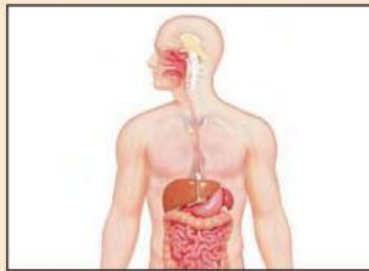
Nervous system, Skeletal system, Circulatory system, Immune system, Excretory system, Respiratory system, Muscular system, Digestive system

### Think Fast

A. Identify the following organ systems and name them :



1



2



3

B. Rearrange the letters to name various organ systems :

1. EXRECOTYR

2. MIMEUN

3. ELESKTLA

4. VERNUOS