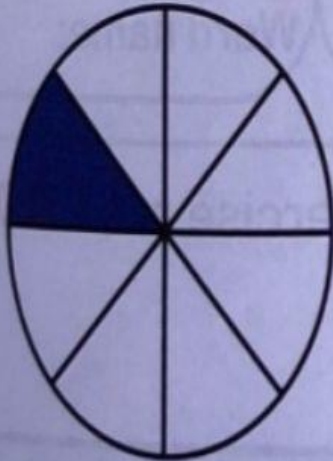


Look at the diagrams carefully. Fill in the spaces with the correct answers.

EXERCISE 2

Complete the following.

1



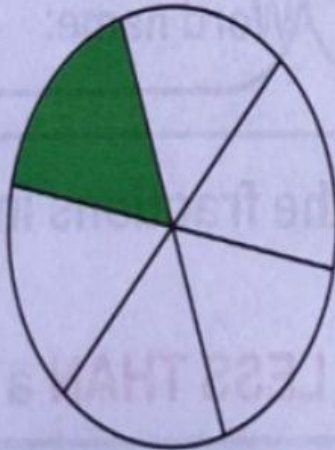
Number of **equal** parts =

The shaded part is out of parts.

Fraction :

Name in words:

2



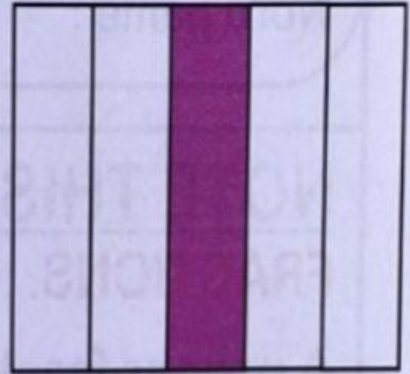
Number of **equal** parts =

The shaded part is out of parts.

Fraction :

Name in words:

3



Number of **equal** parts =

The shaded part is out of parts.

Fraction :

Name in words: