

## LEMBAR KERJA PESERTA DIDIK (LKPD)

LKPD adalah panduan dalam melakukan aktivitas pembelajaran, yaitu:

Kelas/Semester : XI / .....

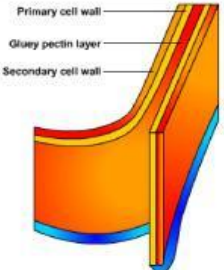
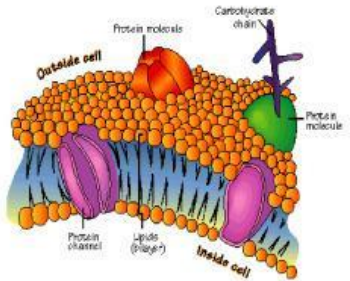
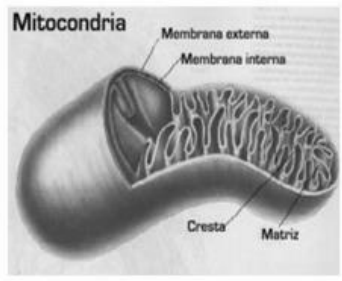
Mata Pelajaran : .....

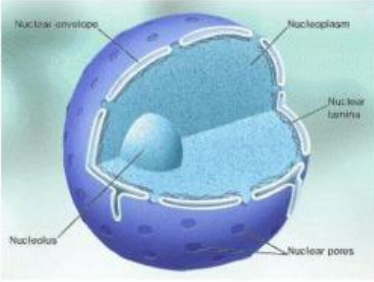
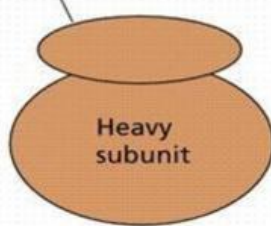
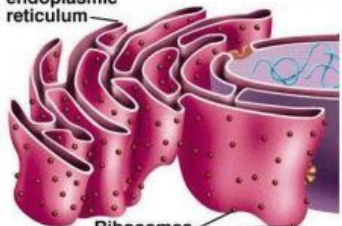
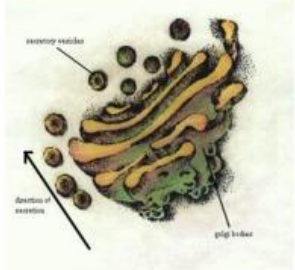
Hari/Tanggal : .....

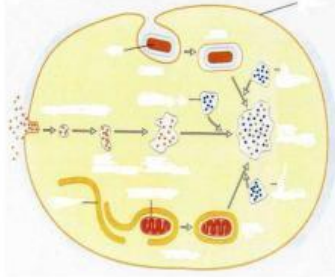
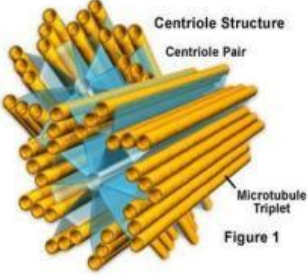
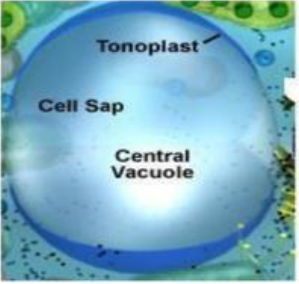
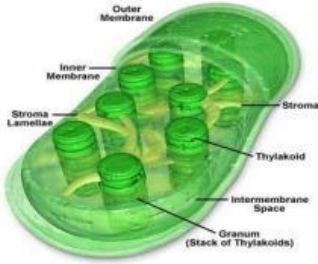
Nama siswa : .....

Materi pembelajaran : .....

Cermati berbagai skema gambar berbagai organel sel di kolom pertama tabel berikut, kemudian deskripsikan struktur dan fungsinya pada kolom yang tersedia!

No.	Gambar organel sel	Deskripsi struktur	Fungsi
1.	 <p style="text-align: center;"><i>Dinding sel</i></p>		
2.	 <p style="text-align: center;"><i>Membran sel</i></p>		
3.	 <p style="text-align: center;"><i>Mitokondria</i></p>		

4.	 <p>Nuclear envelope Nucleoplasm Nuclear lamina Nucleolus Nuclear pores</p> <p><i>Nukleus</i></p>		
5.	<p>Light subunit</p>  <p>Heavy subunit</p> <p><i>Ribosom</i></p>		
6.	<p>Rough endoplasmic reticulum</p>  <p>Ribosomes</p> <p><i>Retikulum endoplasma</i></p>		
7.	 <p>primary vesicles direction of secretion golgi bodies</p> <p><i>Badan golgi</i></p>		

8.	 <p style="text-align: center;"><i>Lisosom</i></p>		
9.	 <p style="text-align: center;"><i>Sentriol</i></p>		
10.	 <p style="text-align: center;"><i>Vakuola</i></p>		
11.	 <p style="text-align: center;"><i>Kloroplas</i></p>		