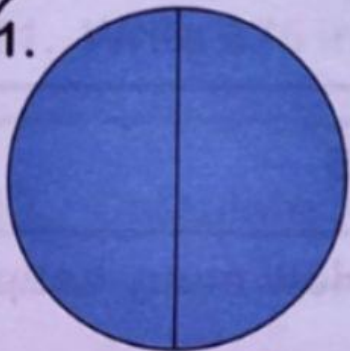


Look at the diagrams below carefully.

Click on the shapes which show one (1) whole divided into equal parts.


1.



2.



3.



4.



5.



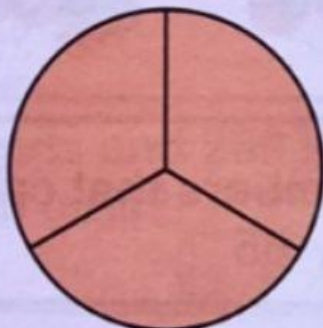
6.



7.



8.




9.



10.



11.



12.

