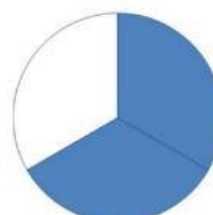
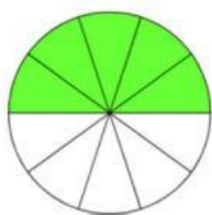
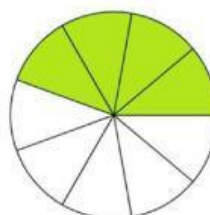
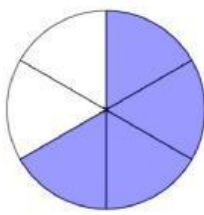
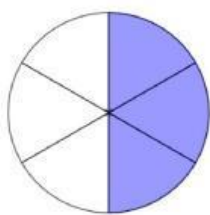


Actividad Fracciones

Arrastre el dibujo en su fracción correcta.



$\frac{3}{4}$

$\frac{5}{10}$

$\frac{4}{6}$



$\frac{4}{9}$

$\frac{2}{3}$

$\frac{3}{6}$



Elaborado por: Lozano Pazmiño Jack Allan