

NAME: _____
DATE: _____

1st Grade

Science

Select the correct answer

1. We call plants our friends because they give us

2. Select the plants that we get food from.



3. Select the plants that we can use for medicine.



4. Select whether the sentences below are true or false.

- a. Plants give us wood to build homes and furniture. True False
- b. Plants are not our friends so we can harm them. True False
- c. We can get fibers to make clothing from plants. True False
- d. Plants gives us oxygen that we breathe in. True False
- e. Some plants are used by farmers to keep away harmful insects True False

5. What do you call a place where plants and animals have what they need to live?

- a. nest b. shelter c. habitat

NAME: _____
DATE: _____

6. Deer live in a forest. What do deer need that they find in a forest?

- a. food and shelter b. water and animals

7. A place that is very dry and gets little rain is most likely a/an

- a. forest b. desert c. ocean

8. Which of these animals will you find in a desert?

- a. dog b. camel c. cat

9. How do kangaroos move about? They

- a. walk b. run c. hop

10. How do cockroaches move about? They

- a. run b. fly c. jump

11. What is the color of a sunflower?

- a. White b. Yellow c. Pink d. Blue

12. Identify the color of an apple?

- a. Red b. Blue c. Black d. Purple

13. What is the color of blood in a human body?

- a. Pink b. Orange c. Red d. Green

14. Which color symbolizes peace and purity?

NAME: _____
DATE: _____

a. Purple b. Black c. White d. Red

15. Colour is one of the important elements of design. a. True b. false c. Maybe d. Not sure

16. Which of these colors is on the Nigerian flag?

a. Blue b. Green c. Yellow d. Black

17. Clay can often be what color?

a. gray and red b. black and green c. brown and white

18. What are the 3 types of soil?

a. sand, clay and loamy b. sand, dirt and loamy
c. sand, stone and silt

19. How does clay soil feel when touched?

a. sticky b. rough c. gritty

NAME: _____


DATE: _____

20. How animals move**walks****swims****crawls****fly****hops**

Choose the correct word from the box above and type it on the line under the picture.

























NAME: _____
DATE: _____

21. Colors, shapes and sizes can be seen by our _____.

a. ears b. hands c. eyes d. nose

22. The nose can _____ good and bad odor.

a. taste b. smell c. see d. feel

23. The hands or skin can _____ objects.

a. see b. taste c. touch d. smell

24. What do we use to taste food?

a. nose b. ear c. tongue d. eye

25. Cookies smell _____.

a. bad b. delicious c. soft d. rough

26. Choose the word in the sentence that describes one of the senses. I can hear a loud airplane in the sky.

a. I b. Hear c. airplane d. in

27 . Why is sandy soil not good for growing crops?

a. The particles in sand are packed too loosely.

b. The particles in sand are packed too tightly.

c. Water cannot drain through sand.

NAME: _____
DATE: _____

d. Sand has zero nutrients and minerals.

28. Soil is composed mainly of _____.

a. water, air, sand, mud and shell

b. worms, minerals, shells, air and rock pieces

c. air, rock pieces, decayed organic matter

d. rock pieces, mud, decayed organic matter, minerals and worms

29. What kind of soil is most likely found in the desert?

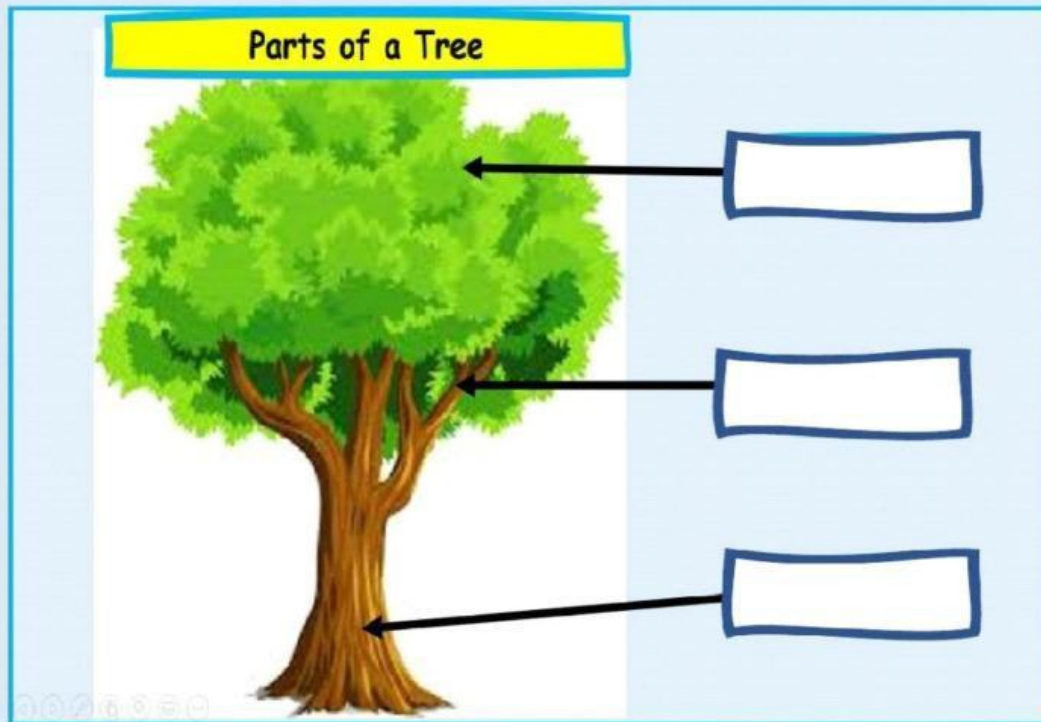
a. dry, sandy soil b. dark, damp soil c. sticky, red soil

d. thick, muddy soil.

NAME: _____
DATE: _____

30.

Label the parts of the tree.













leaves

branch

trunk

NAME: _____
DATE: _____

31. Match each animal to the type of cover it has.

Pig 	Feathers	Duck 
Squirrel 		Lion 
Bird 	Scales	Turtle 
Snail 		Snake 
Shark 	Fur or Hair	Humans 
	Shell	
	Skin	