













Dotted notes (III)

Choose the correct note!





a  =   

d  =   

b  =   

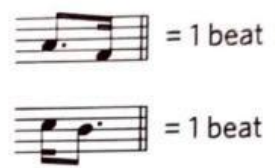
e  =   

c  =   

f  =   

Grouping dotted notes

We've learnt that quavers and semiquavers can be beamed together so that they are grouped into beats. The same is true of dotted notes: you will often see a dotted quaver joined to a single semiquaver.



Exercise 9 Tick (✓) one box for each question to show which bar is grouped correctly.

a

☐ ☐ ☐

b

☐ ☐ ☐

c

☐ ☐ ☐

d

☐ ☐ ☐

Exercise 8 Add the time signature to each of these bars.

a

b

c

d