




General Exercise 1

Instructions: Look at the melody below then answer the questions.



1. What is the name of the clef? _____
2. Another way to write the time signature is _____
3. How many counts/beats are there in each bar? _____
4. In which bars can you find only crotchet notes? _____
5. Which bar has only a semibreve note? _____
6. How many note C's are there in the melody? _____
7. How many minim notes are there in the melody? _____
8. How many counts/beats is the last note in the melody? _____
9. In which bars can you find this melody  ? _____
10. How many times do you see this rhythm  ? _____

