











A. Match.

 <input type="checkbox"/>	 <input type="checkbox"/>	 <input type="checkbox"/>	 <input type="checkbox"/>	 <input type="checkbox"/>
1. chicken	2. mango	3. lemon	4. chips	5. fish
6. noodles	7. nuts	8. apples	9. mangoes	10. nut
 <input type="checkbox"/>	 <input type="checkbox"/>	 <input type="checkbox"/>	 <input type="checkbox"/>	 <input type="checkbox"/>

B. Read and write.

11

13

17

19

14

C. Match the question and the answer.

- | | |
|-------------------------------|-----------------------------|
| 1. What color is the mop? | a. Yes, it is. |
| 2. How many mops are there? | b. No, it isn't. |
| 3. Is the mop under the lock? | c. There are fourteen mops. |
| 4. Is a mop an animal? | d. It's gray. |

D. Complete the solution.

- | | |
|------------------------------------|-------------------------------------|
| 1. Eleven minus equals five. | 4. Eleven minus equals zero. |
| 2. Nine plus equals eleven. | 5. Six plus equals eleven. |
| 3. Ten plus equals eleven. | 6. Eleven minus equals three. |

E. Choose the best option A, B or C.

- | | | | |
|---|-------------|-----------|------------|
| 1. Which number plus eight makes eleven? | A. 2 | B. 3 | C. 4 |
| 2. Which number minus nine equals two? | A. 7 | B. 12 | C. 11 |
| 3. Which number is the least ? | A. thirteen | B. twelve | C. sixteen |

4. Which clock says “**eleven** o'clock”?



A



B



C

