

# Prism And Cylinder

Name: \_\_\_\_\_

Class / NO. : \_\_\_\_\_

Joint with arrow : Have students draw the correct matching lines.

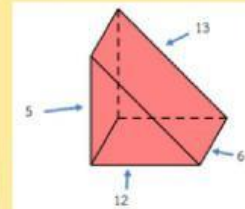
(1)



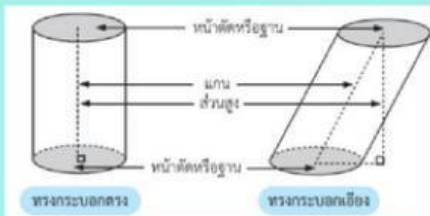
2,475  
cubic units

(2)

Unfolded shape of  
a pentagonal prism

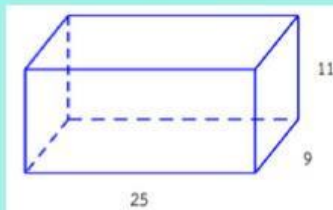


(3)



$r = 8$

(4)



$2\pi r^2 + 2\pi rh$

(5)

240 square units

