

Intervals

Semitones	Interval name	Notes in key of C
0	Unison	C-C
1	Minor 2nd	C-Db
2		
3		
4		
5		
6	Augmented 4th / Diminished 5th / Tritone	
7		
8		
9		
10		
11		
12		













Place the right answers in the table.

Minor 3rd Major 3rd Major 6th Minor 6th

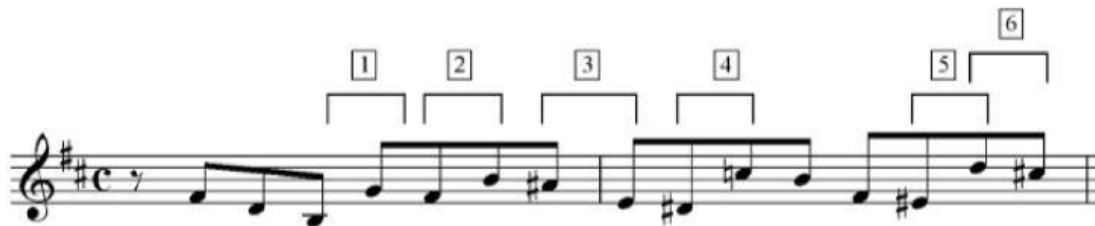
Minor 7th Major 7th Perfect 4th

C-D C-Eb C-E C-F C-Gb C-G

C-A C-Bb C-B C-C C-Ab Octave

Describe each of the melodic intervals marked in these extracts. Look carefully at the key signature and any accidentals in the bar.



1.	3.	5.
2.	4.	6.