


Name:

Subject: Mathematics

Telling Time Half Past the Hour

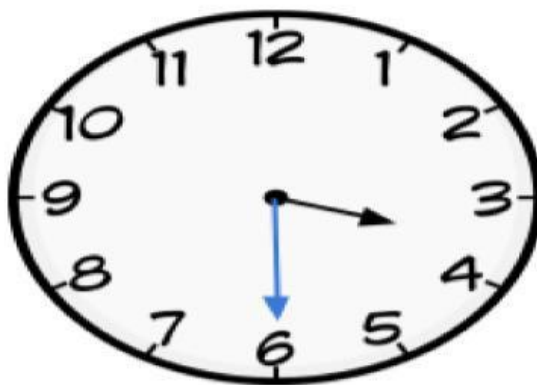


Telling time Half Past the Hour is easy!

1. Look at the short hand: This is the hour hand. It will be **halfway** between two numbers.
2. Look at the long hand: This is the minute hand. It will **always point** to the **6**.
3. Say  "**half past**": Look at the number the short hand just passed and say "half past" that number.

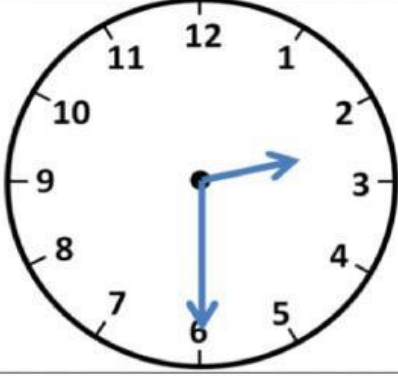
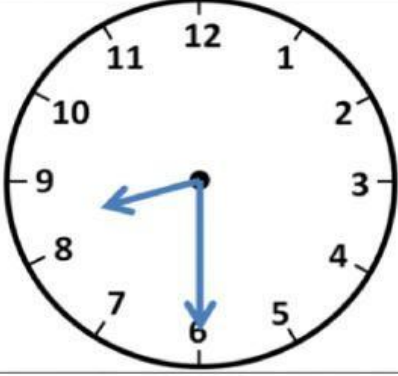
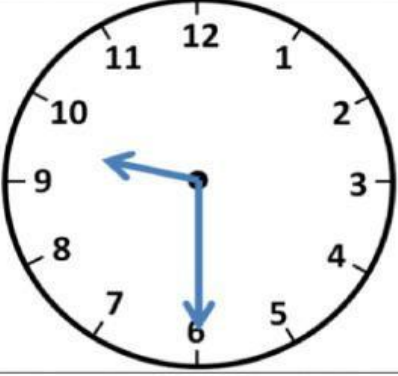
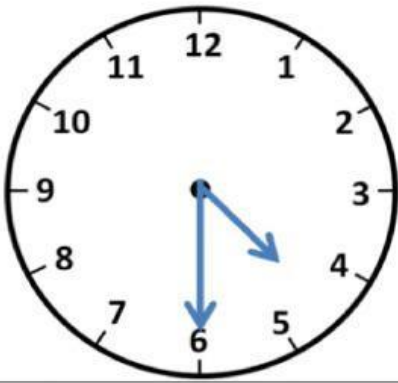
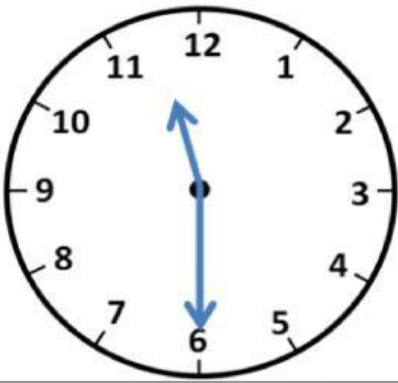
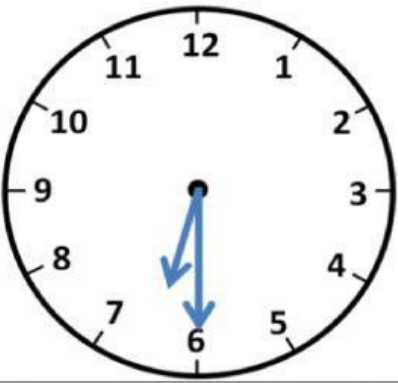
Example: If the short hand is between **3** and **4** and the

long hand is pointing to **6**, say  "**half past 3**" or **3:30**.



half past 3 or 3:30

Write the correct time below each clock. The first one has been done for you.

		
Half past 2		
		

Write the correct time on the line. The first one is done for you.

Half Past **4** is the same as 4:30

Half Past **6** is the same as _____

Half Past **8** is the same as _____

Half Past **2** is the same as _____