

Actividad 1 :






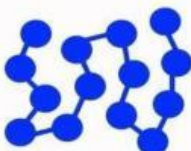



A) Definir las siguientes palabras :

Materia: _____

Volumen: _____

Masa: _____

B) Identificar los estados de la materia.

<div data-bbox="290 936 481 1008" style="border: 1px solid black; width: 120px; height: 32px; margin-bottom: 10px;"></div> <div data-bbox="357 1041 448 1227" style="display: block; margin: 0 auto;"></div> <div data-bbox="290 1209 603 1509" style="text-align: center;"></div> <div data-bbox="316 1568 481 1713" style="text-align: center;"></div> <div data-bbox="306 1740 497 1809" style="text-align: center; background-color: #d9e1f2; padding: 5px;">Líquido</div>	<div data-bbox="692 936 884 1008" style="border: 1px solid black; width: 120px; height: 32px; margin-bottom: 10px;"></div> <div data-bbox="730 1025 821 1211" style="display: block; margin: 0 auto;"></div> <div data-bbox="614 1209 901 1532" style="text-align: center;"></div> <div data-bbox="654 1563 845 1713" style="text-align: center;"></div> <div data-bbox="636 1740 829 1809" style="text-align: center; background-color: #d9e1f2; padding: 5px;">Gaseoso</div>	<div data-bbox="1082 947 1273 1019" style="border: 1px solid black; width: 120px; height: 32px; margin-bottom: 10px;"></div> <div data-bbox="1082 1041 1182 1227" style="display: block; margin: 0 auto;"></div> <div data-bbox="877 1209 1276 1456" style="text-align: center;"></div> <div data-bbox="986 1534 1177 1702" style="text-align: center;"></div> <div data-bbox="992 1740 1185 1809" style="text-align: center; background-color: #d9e1f2; padding: 5px;">Sólido</div>
--	--	--