

Name: _____ Date: _____ Class: _____

1. The shirts should be on the washing line in the correct order.

Draw a ring around the mistakes on the washing line.



2.

(a) Write the missing numbers.

0	1	2			5				9	
---	---	---	--	--	---	--	--	--	---	--

(b) Write the number that comes after.

3	
---	--

5	
---	--

(c) Write the number that comes before.

	4
--	---

	8
--	---

(d) Write the missing numbers.

	7	
--	---	--

		10
--	--	----

3. Trace the numbers. Then match the numbers with their names.

six	1
three	2
one	3
five	4
seven	5
ten	6
nine	7
two	8
eight	9
four	10

4. Write the missing number words.

1	2 two	3	4 four	5
6 six	7	8 eight	9	10

5. Draw a line to match the words with the correct drawings.

a pairs

3

5

9


b odd numbers



c equal



d more than



e less than



6. Compare the sets.

(a) Tick (✓) the set that has fewer insects.




(b) Tick (✓) the set that has more insects.


☐




☐

(c) Tick (✓) the sets that have the same number of animals.


☐

☐

☐

7. Compare the sets. Complete the sentences.

		
apples	oranges	bananas

seven	more	four	fewer	the same	four
-------	------	------	-------	----------	------

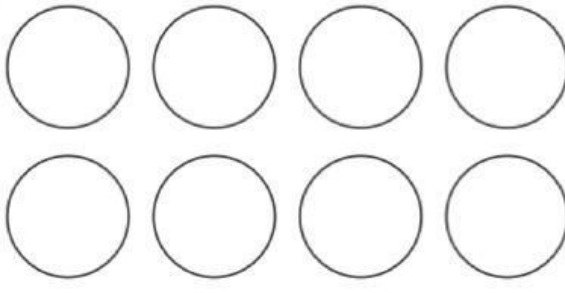
There are _____ apples, _____ oranges and _____ bananas.

There are _____ oranges than apples.

There are _____ bananas than oranges.

The number of apples and bananas is _____

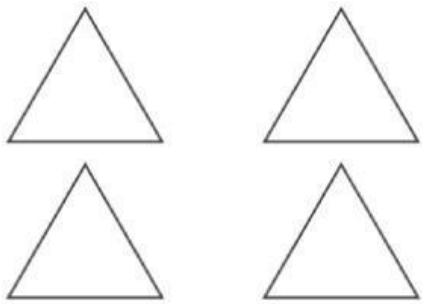
8. Count the shapes in each box and circle the correct answer.



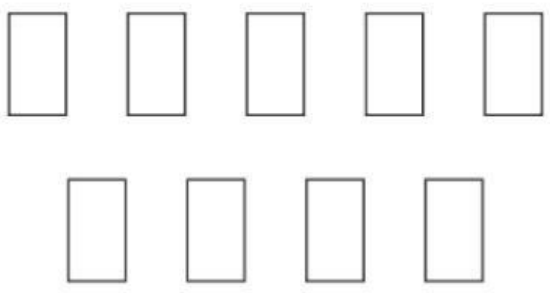
Odd Even



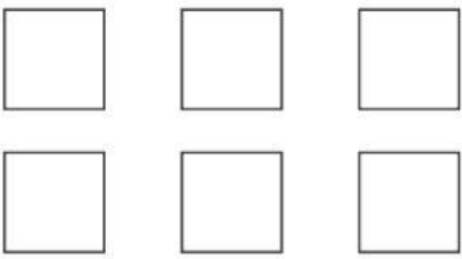
Odd Even



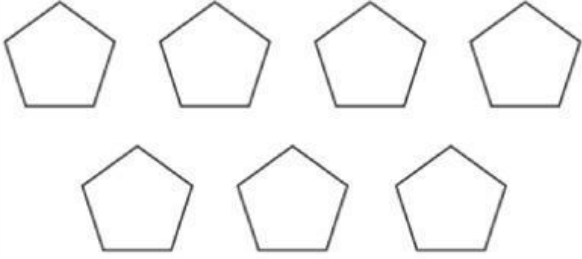
Odd Even



Odd Even



Odd Even



Odd Even