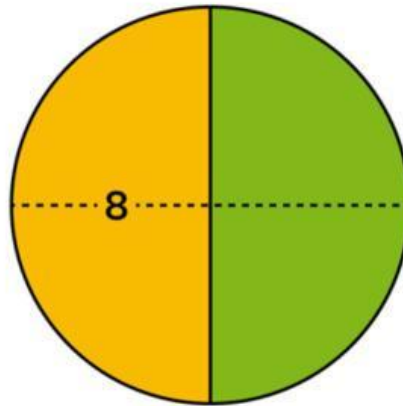


## CAMBRIDGE PRIMARY MATHEMATICS 2

### UNIT 9 – REVISION

**Part 1. Half of a number is 8. Find the other fractions of the number.**



**1. What is one quarter?    2. What is three quarters?    3. What is the number in the green part?**

a. 4

a. 12

a. 8

b. 2

b. 6

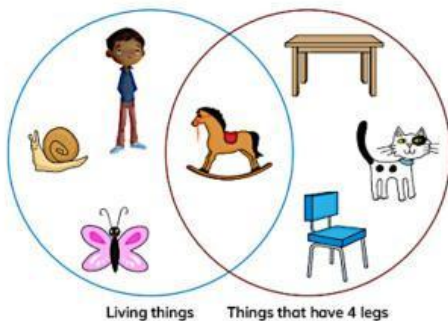
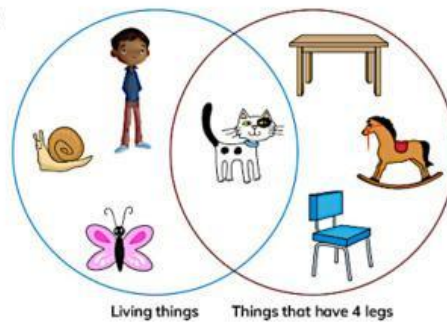
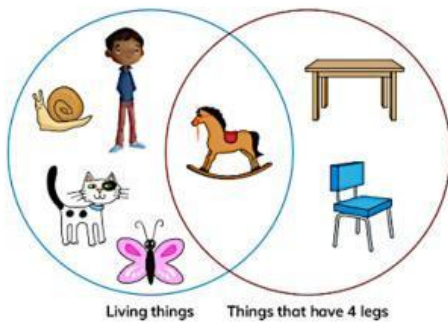
b. 16

c. 1

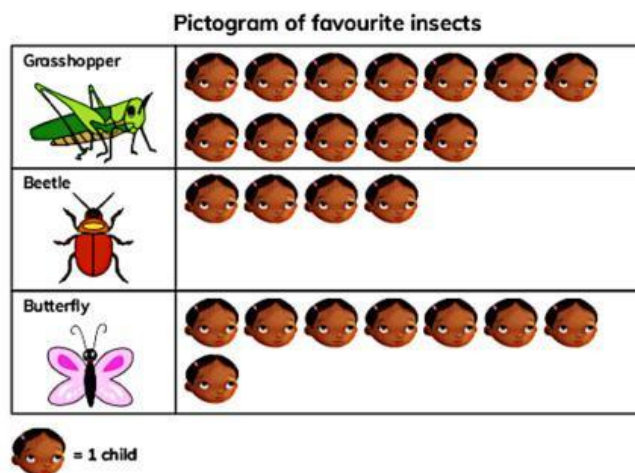
c. 4

c. 24

**Part 2. Which Venn diagram correctly sorts living things and things that have 4 legs?**



**Part 3. A class voted for their favourite insect. Look at the pictogram and then write the correct answer for each question.**



1. How many children are there in the class? \_\_\_\_\_
2. Which insect was chosen the most? \_\_\_\_\_
3. Which insect was chosen the least? \_\_\_\_\_

**THE END**