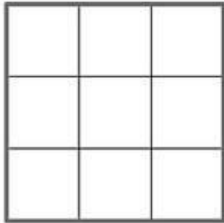


CAMBRIDGE PRIMARY MATHEMATICS 2
UNIT 3 – REVISION

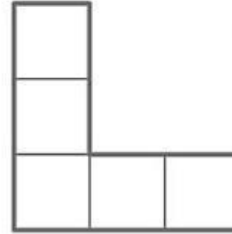
Part 1. Find the area of each shape.

0.



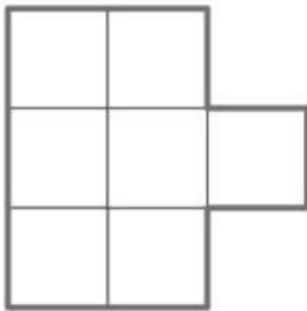
squares

1.



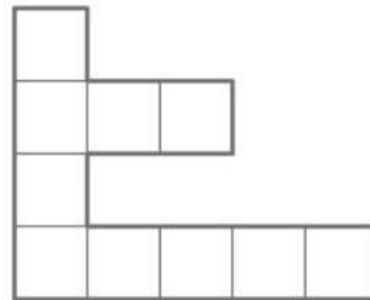
squares

2.



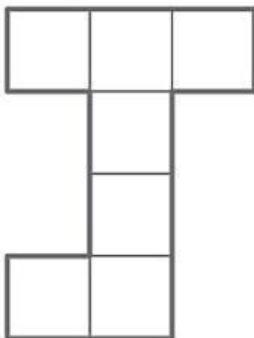
squares

3.



squares

4.



squares


5.



squares

Part 2. Would you measure these items in metres or centimetres? Choose the answer.

a




m	cm
---	----

b




m	cm
---	----

c



m	cm
---	----

d



m	cm
---	----

e



m	cm
---	----

f



m	cm
---	----

Part 3. Use the ruler in the picture to answer the questions. Circle the correct answer.




1. What is the best estimate of the width?

- A. 10 centimetres
- B. 30 centimetres
- C. 20 centimetres

2. What is the correct width after measuring the book?

- A. 17 centimetres
- B. 16 centimetres
- C. 19 centimetres

Part 4. Find the difference between Sofia's and Marcus's heights. Circle the answer and write the number sentence.



- A. 8 centimetres
- B. 9 centimetres
- C. 12 centimetres

Number sentence: _____

Part 5. Circle the correct answer.



1. Height of the tree is than 1m.

- A. less
- B. greater

3. Height of the man is than 1m.

- A. less
- B. greater

2. Length of the car is than 1m.

- A. less
- B. greater

4. Height of the phone is than 1m.

- A. less
- B. greater