


Menu



Sandwich \$3.25



Pizza \$2.95



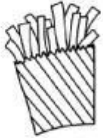
Chicken \$4.60



Salad \$3.75




Nuggets \$4.55



French Fries \$1.10



Onion Rings \$2.50



Juice Box \$0.55



Soda \$1.25



Milk \$0.70



Lemonade \$1.10



Donut \$0.95



Ice Cream \$2.00



Hot Dog \$4.50




Potato \$1.35



Hamburger \$5.45



Taco \$3.65



Mac & Cheese \$3.90



Sushi \$7.15



Eggs & Bacon \$4.00



Pancakes \$5.05



Apple \$0.65



Watermelon \$1.15



Pear \$0.50



Pretzel \$2.05


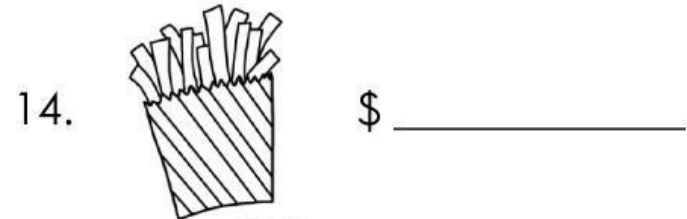
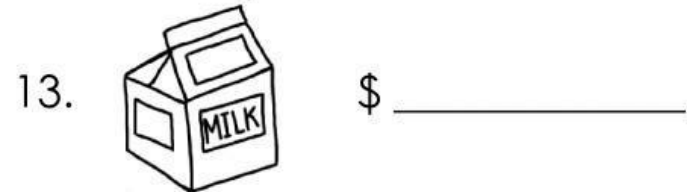
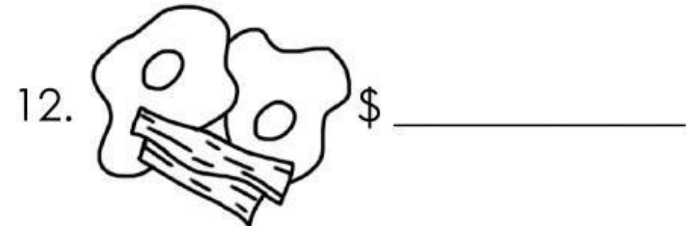
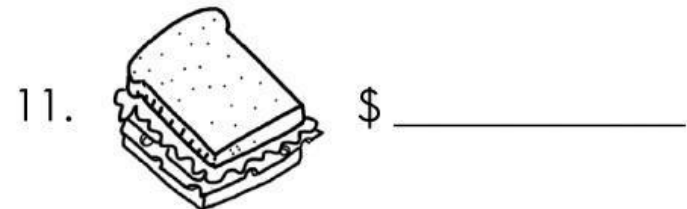
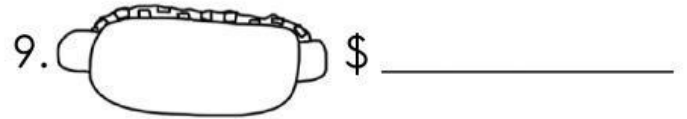
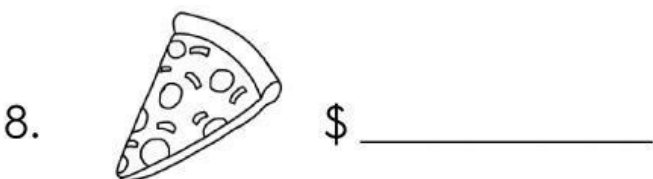
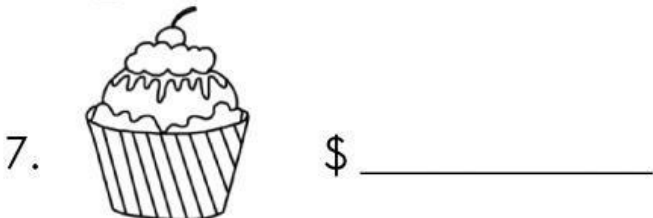
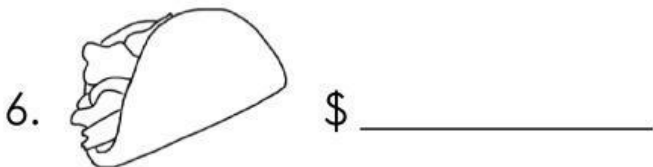
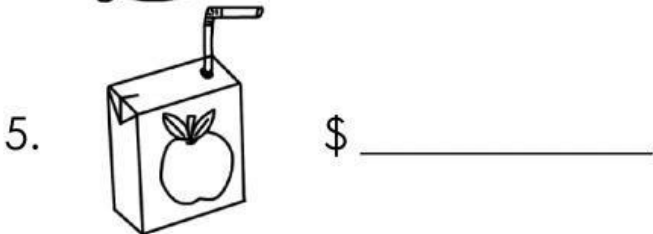
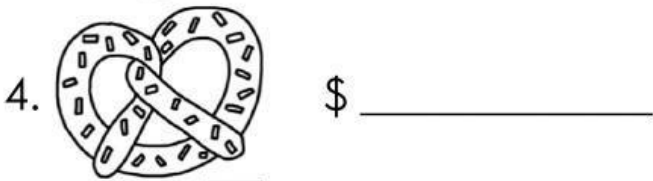
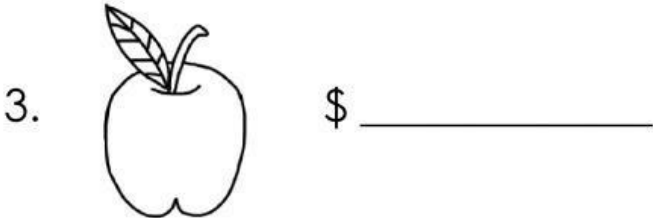
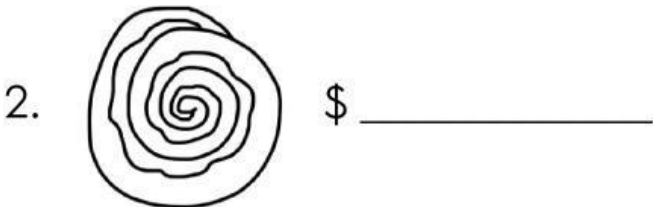
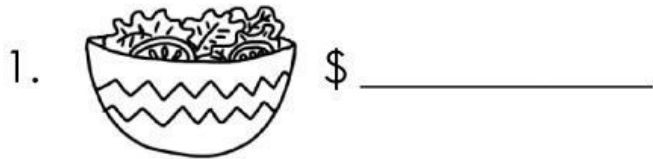


Cinnamon Bun \$2.15

Name: _____

Locating Prices on the Menu

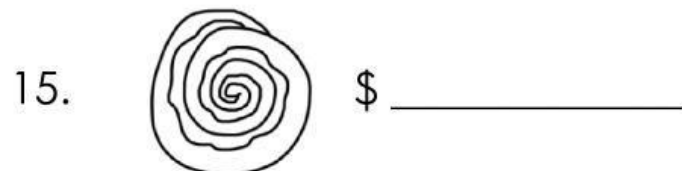
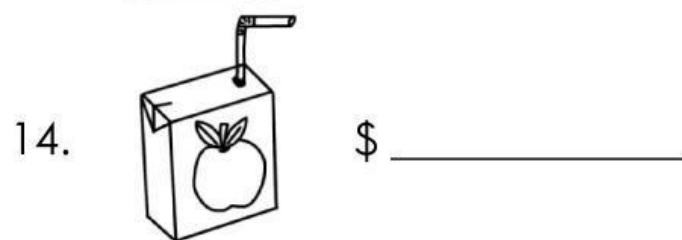

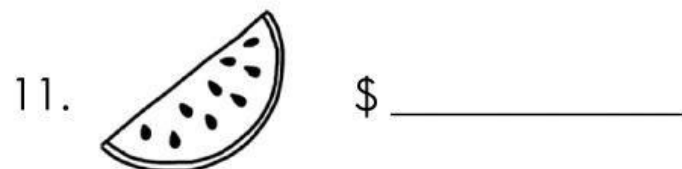
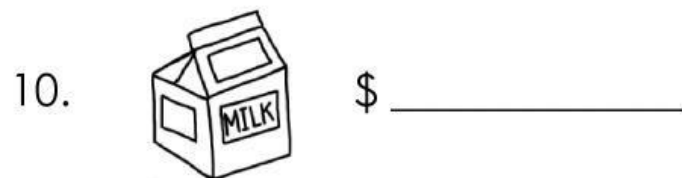


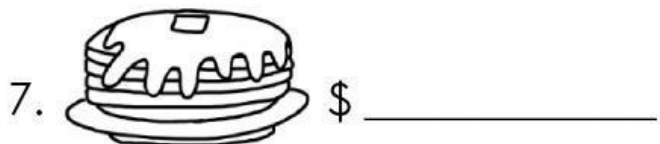

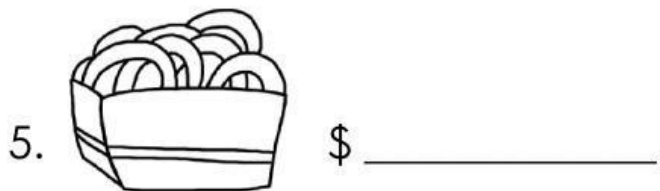
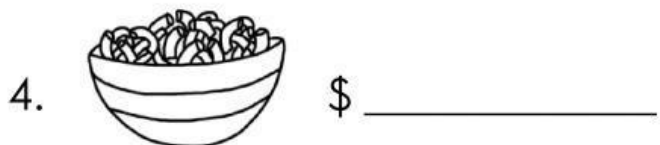
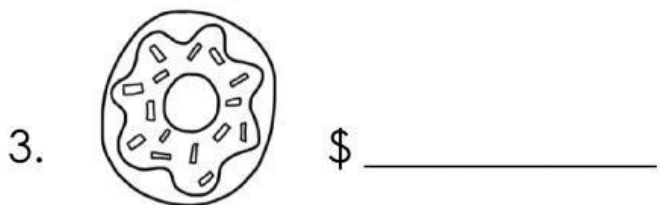
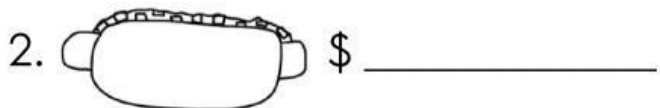
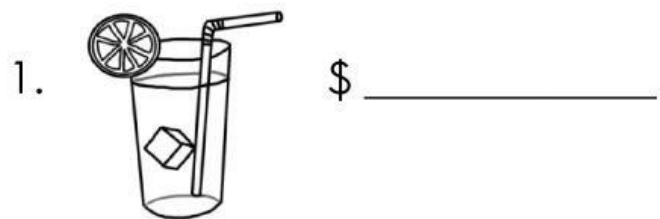
Directions :Use the Menu list to find the price of each food.



Name: _____

Locating Prices on the Menu

Directions: Use the Menu list to find the price of each food.



Name: _____



Locating Prices on the Menu



Directions :Use the Menu list to find the price of each food.

1. Cinnamon \$ _____
Bun

9. Pancakes \$ _____

2. Eggs & \$ _____
Bacon

10. Mac & \$ _____
Cheese

3. Hamburger \$ _____

11. Potato \$ _____

4. Pizza \$ _____

12. Salad \$ _____

5. Nuggets \$ _____

13. French \$ _____
Fries

6. Onion \$ _____
Rings

14. Juice Box \$ _____

7. Soda \$ _____

15. Lemonade \$ _____

8. Donut \$ _____


16. Ice \$ _____
Cream

Name: _____

Subtraction: No Regrouping

Directions: Use the Menu list to find out how much money you would have left if you bought each item.

1. Had \$ 6.29

Bought  \$ _____

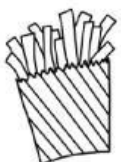
Left \$ _____

2. Had \$ 4.09

Bought  \$ _____

Left \$ _____

3. Had \$ 7.42

Bought  \$ _____


Left \$ _____

4. Had \$ 4.75

Bought  \$ _____

Left \$ _____

5. Had \$ 5.59

Bought  \$ _____


Left \$ _____

6. Had \$ 0.88

Bought  \$ _____

Left \$ _____

7. Had \$ 8.96

Bought  \$ _____

Left \$ _____

8. Had \$ 5.37

Bought  \$ _____

Left \$ _____

Name: _____

Subtraction: No Regrouping

Directions: Use the Menu list to find out how much money you would have left if you bought each item.

1. Had \$ 6.72

Bought  \$ _____

Left \$ _____

2. Had \$ 2.96

Bought  \$ _____


Left \$ _____

3. Had \$ 4.45

Bought  \$ _____


Left \$ _____

4. Had \$ 3.87

Bought  \$ _____


Left \$ _____

5. Had \$ 9.66

Bought  \$ _____


Left \$ _____

6. Had \$ 4.46

Bought  \$ _____


Left \$ _____

7. Had \$ 2.27

Bought  \$ _____

Left \$ _____

8. Had \$ 1.73

Bought  \$ _____

Left \$ _____