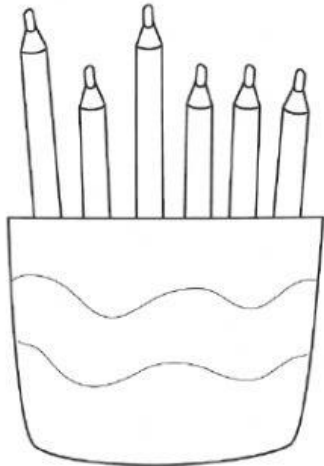


CI RAGIONO...

1 OSSERVA LE ILLUSTRAZIONI, LEGGI, CONTA E COMPLETA.



QUANTE MATITE IN TUTTO?

LE MATITE LUNGHE SONO


LE MATITE CORTE SONO

$$\square + \square = \square$$


LE MATITE IN TUTTO SONO




QUANTI ANIMALI IN TUTTO?




LE RANE IN TUTTO SONO



I PESCI IN TUTTO SONO



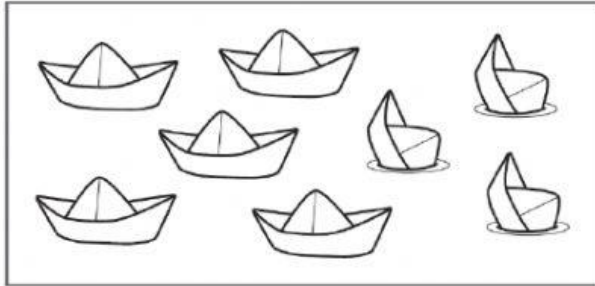
$$\square + \square = \square$$



GLI ANIMALI IN TUTTO SONO


CHE COSA RESTA?

1 Osserva, conta, poi completa.




- barchette in tutto
- barchette affondate
- barchette rimaste

$$\square - \square = \square$$




- fragole in tutto
- fragole raccolte
- fragole rimaste

$$\square - \square = \square$$



- uova in tutto
- uova rotte
- uova rimaste intere

$$\square - \square = \square$$



- fette in tutto
- fette sul vassoio
- fette nella mano di Pino

$$\square - \square = \square$$