

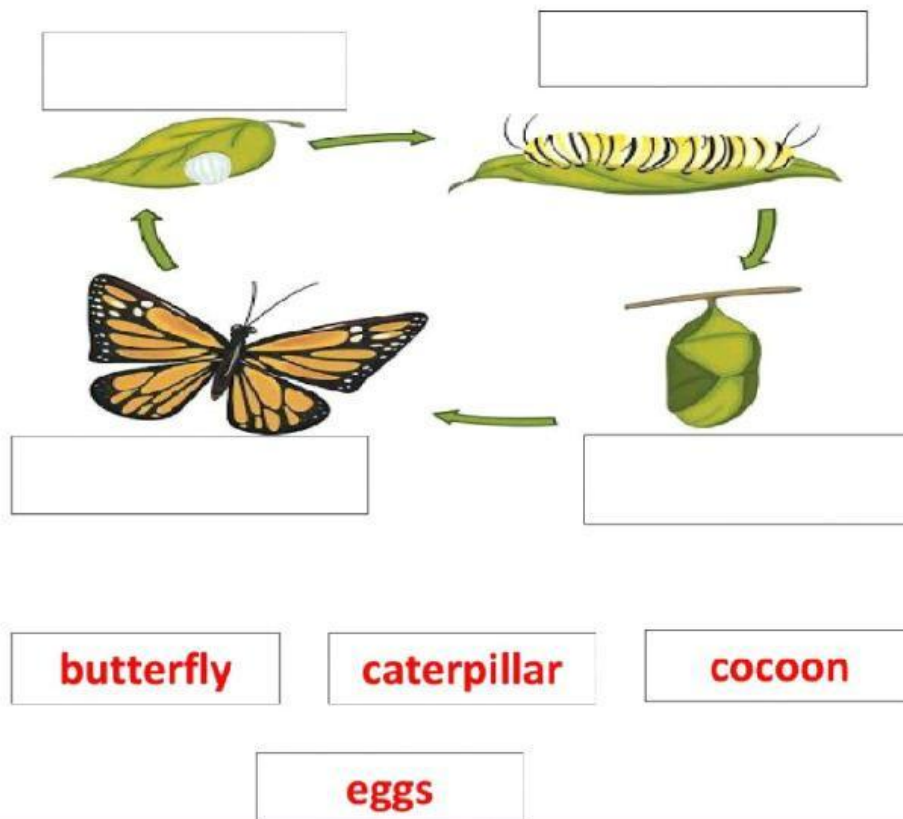
NAME: _____
DATE: _____

Science

3RD Grade

Drag and drop the correct answer

Life cycle of a butterfly



Select the correct answer

1. What is liquid volume?

a. How much does a liquid weigh?

NAME: _____
DATE: _____

b. The amount of space taken up by a liquid.

c. The mass of liquid.

2. 1 litre_____ 1 quart. a. is equal to b. is greater than

c. is less than

3. What would you use to measure the volume of the liquid inside
a swimming pool?

a. Millilitres

b. Liters

4. What would you use to measure the volume of the liquid inside
a measuring spoon?

a. Quarts

b. Millilitre

5. Harat makes a pitcher of lemonade for her slumber party.

Which unit can she use to measure the liquid volume of lemonade
she makes?

a. Grams


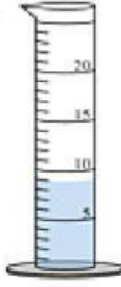

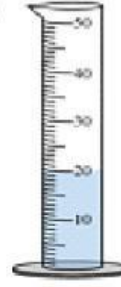

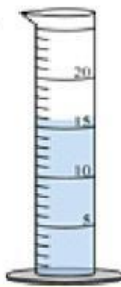


b. Pounds

c. Litre

6. Determine how much liquid is in each graduated cylinder.

NAME: _____
DATE: _____

Determine how much liquid is in each graduated cylinder.

1) 	2) 	3) 	4) 	Answers 1. _____ 2. _____ 3. _____ 4. _____ 5. _____ 6. _____ 7. _____ 8. _____ 9. _____ 10. _____
5) 	6) 	7) 	8) 	

7. What is the curved surface which is created because liquids cling to the edge of a graduated cylinder called?

a. air pocket b. water cave c. meniscus

8. Farming with hoes and cutlasses are examples of _____ technology.

a. developed b. underdeveloped c. anti-developed

9. Wristwatches and clocks are the instruments for measuring time in the _____
a. olden days b. modern days c. middle age

NAME: _____
DATE: _____

10. _____ involves the use of crude methods and tools to do things.

- a. Developed technology b. Underdeveloped technology
c. Advanced technology

11. _____ improves our standard of living.

- a. developed b. underdeveloped technology
c. advanced technology

12. Which of the following is the beginning of the plant's life cycle? a. Plants b. Beans c. Seeds d. Leaves

13. The _____ is the different parts of a living thing's life as it grows and changes.

- a. book b. tomatoes c. seed d. Life Cycle

14. What does a seed need to grow? a. Wind b. Exercise
c. Shelter d. Water

15. What is something that an adult plant can do that young adult plants and seedlings cannot do?

- a. Stay up late b. Have roots c. Produce seeds
d. Have leaves

16. The _____ of a plant grows first. a. leaves b. root
c. flower d. fruits

NAME: _____
DATE: _____







17. The _____ sometimes protects the seeds.

- a. flower b. roots c. fruits d. leaves

18. What is the reason some animals have camouflage?

- a. To hide them b. To help them move
c. To help them stay warm d. To help them have babies

19. Match the words with the pictures.

a spanner	a hammer	a pair of scissors
a chisel	a screwdriver	a pair of pliers
		
		

20. fill in the blank with the correct answers

NAME: _____
DATE: _____

What are these parts of a vehicle used for?

- a. Wheel _____
- b. Engine _____
- c. Mirror _____
- d. Door: _____
- e. Headlight: _____

21. Complete the sentences using the words below

electricity renewable coal

- a. Solar energy is a _____ energy source.
- b. Some sources of energy, such as _____, are non-renewable
- c. A solar panel changes energy from the sun into _____

22. Complete the sentences using the words below

Strangers road help emergency call traffic think

- a. Call for _____ if you are frightened, hurt or there is a fire.
- b. When you make an _____, it is important to know what to say.
- c. Do not cross the road where you cannot see the _____.

NAME: _____
DATE: _____

d. When you are crossing the _____, stop, look, listen and _____.

e. Never open the door to ---- when you are alone.

23. Drag and drop the list below the name that corresponds to each image.

Write the numbers with the words.

1	I use it to clean my clothes.
2	I use it to keep food cold.
3	I use it to heat food.
4	I use it to dry my hair.
5	I use it to change the TV channel.
6	I use it to make a call.
7	I use it to listen to music.
8	I use it to chat with friends.

<input type="checkbox"/>	washing machine
<input type="checkbox"/>	microwave
<input type="checkbox"/>	CD player
<input type="checkbox"/>	fridge
<input type="checkbox"/>	TV remote
<input type="checkbox"/>	Cell phone
<input type="checkbox"/>	tablet
<input type="checkbox"/>	Hair dryer

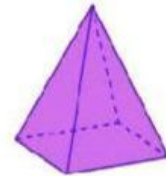
NAME: _____
DATE: _____

24. Choose the solid that matches the given characteristic.

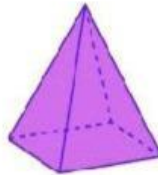
1. I have six faces
that are the
same.

☐☐☐

2. I have no flat
faces.

☐☐☐

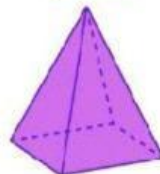
3. I have one point.

☐☐☐

4. I have 2 flat
faces.

☐☐☐

5. I have no
vertices.

☐☐☐