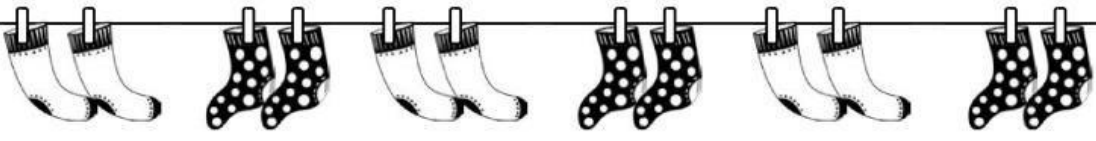



Skip counting

Multiplication


1 How many? Complete the repeated addition.



a $2 + 2 + \square + \square + \square + \square = \square$



b $3 + \square + \square = \square$



c $\square + \square = \square$

2 How many? Skip count to find the answer.



a 2, 4, \square , \square , \square , \square , \square



b 3, \square , \square , \square , \square



c \square , \square , \square , \square