

The area of the surface of the Atlantic Ocean is approximately 31,830,000 square miles. How is the area written in scientific notation?

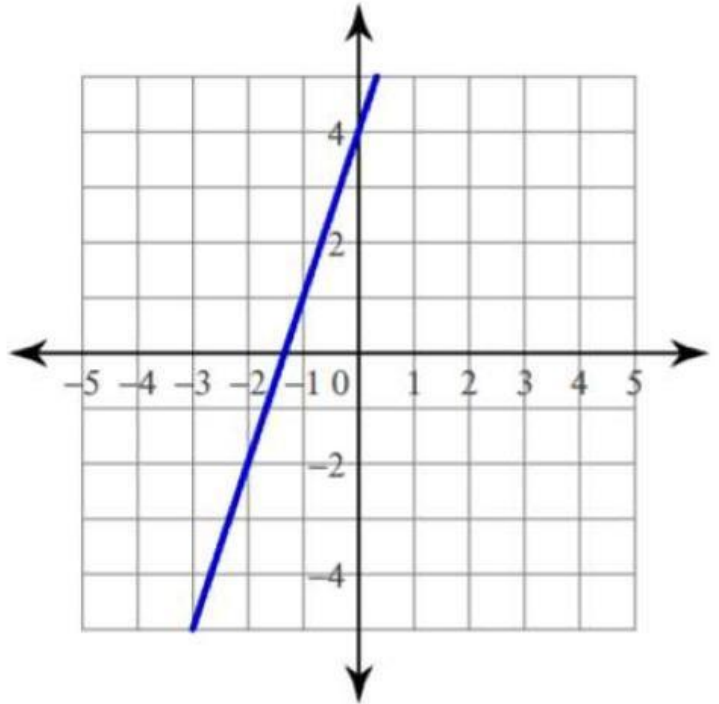
Write an equation of a nonlinear function.

Evaluate the system of equations.

$$2x + 3y = 4$$


$$-4x - 6y = -8$$

Write the equation of the line in slope-intercept form.

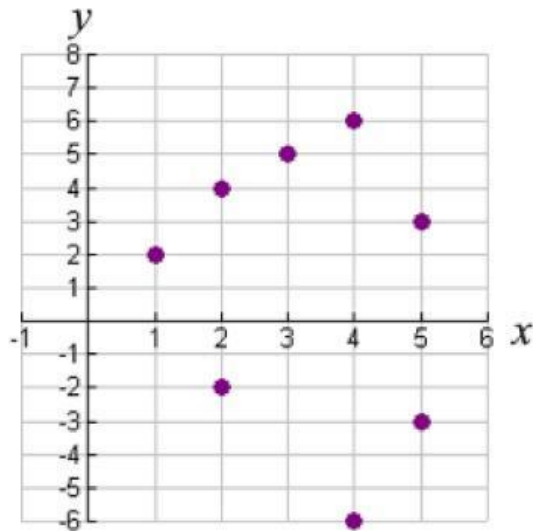


Simplify and write using only positive exponents.

$$\frac{4x^2y^9}{12xy^3}$$


$$-11 + 10(p + 10) = 4 - 5(2p + 11)$$

Does the relation graphed below represent a function? Why or why not?



Covert the decimal below to a fraction in simplest form.

$$0.\overline{45}$$



A cylinder has a diameter of 10 centimeters and a volume of 706.5 cubic centimeters. What is the height of the cylinder?

Estimate to the nearest tenth.

$$\sqrt{110}$$



The park is 5 miles east of your home. The library is 4 miles north of the park. How far is your home from the library? Round your answer to the nearest tenth.

Write the slope-intercept form of the equation of the line.

$$3x - 2y = -16$$

What is the slope of the line?

At a sale on winter clothing, Cody bought two pairs of gloves and four hats for \$43.00. Tori bought two pairs of gloves and two hats for \$30.00. Find the cost of each.

**Write in scientific notation:**

**0.000825**

Describe the correlation (association) of the data in the scatter plot below.

