


Proteins




Fruits



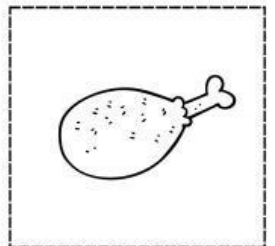

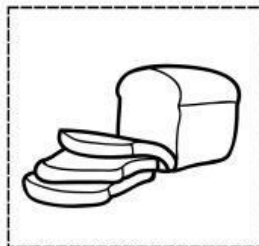


Dairy



Carbohydrates

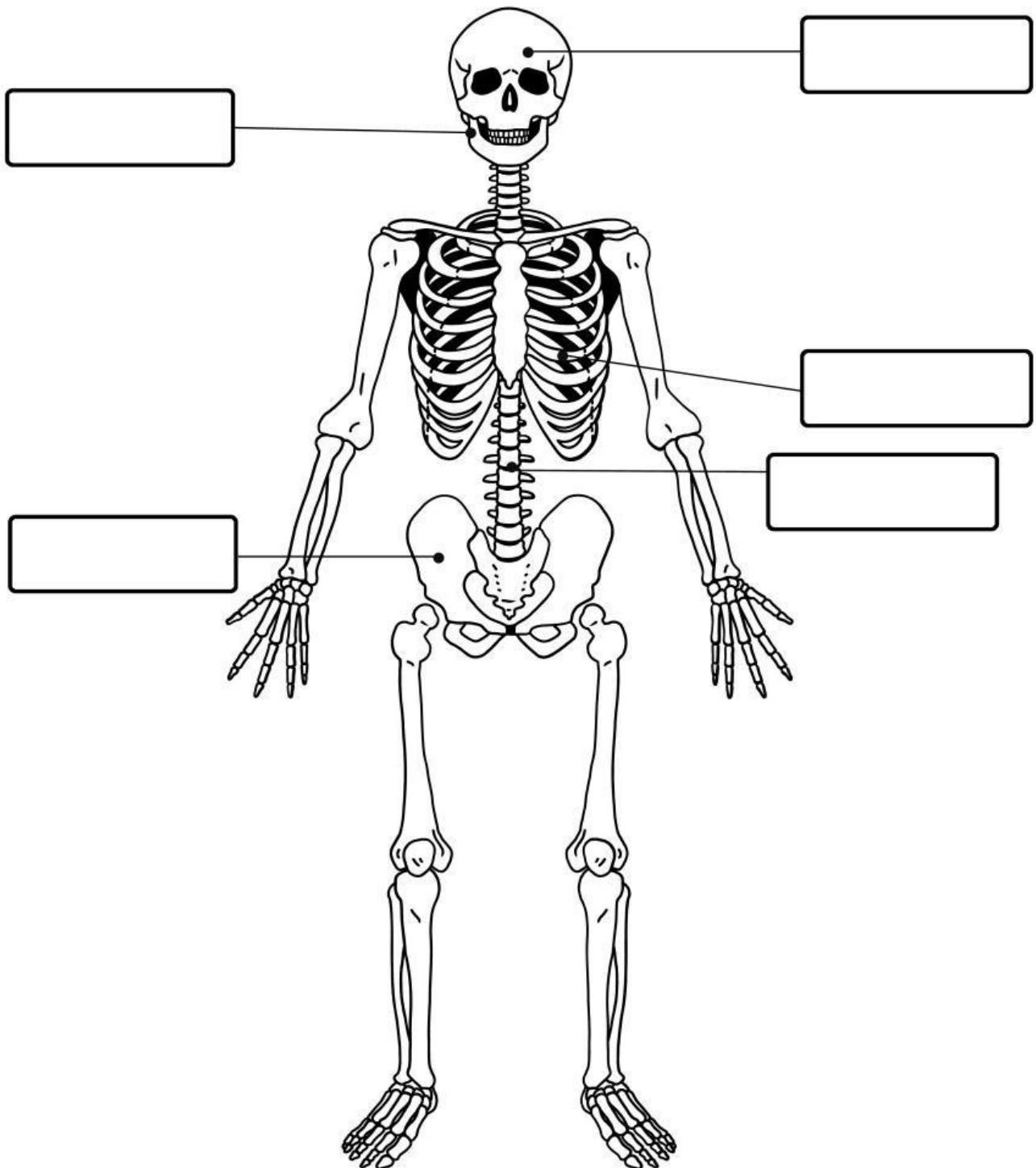


Grains



The Skeletal System

Label the bones:



Ribs

Jaw






Skull

Pelvis

Spine

The Skeletal System

Look at the pictures and circle the correct words:

 <div data-bbox="491 490 756 573">Pelvis</div> <div data-bbox="491 611 756 694">Jaw</div>	 <div data-bbox="1094 490 1359 573">Jaw</div> <div data-bbox="1094 611 1359 694">Ribs</div>
 <div data-bbox="491 806 756 889">Pelvis</div> <div data-bbox="491 927 756 1010">Skull</div>	 <div data-bbox="1094 806 1359 889">Spine</div> <div data-bbox="1094 927 1359 1010">Skull</div>
 <div data-bbox="798 1122 1062 1205">Jaw</div> <div data-bbox="798 1227 1062 1310">Ribs</div>	

Digestive System

Read the sentences, look at the pictures and choose the correct part of the digestive system.



Turn food into small pieces.

mouth

stomach

rectum

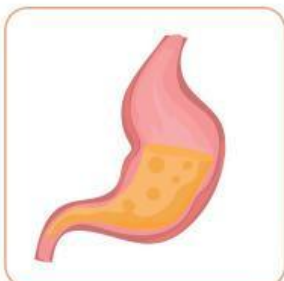


Carries food from the mouth to the stomach.

esophagus

mouth

large intestines

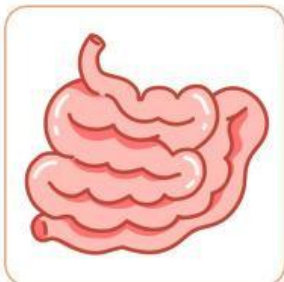


Mixes food with gastric juices.

stomach

large intestines

rectum



Digests and absorbs proteins, fats, and carbs.

small intestines

large intestines

esophagus



Absorbs salt and water from food.

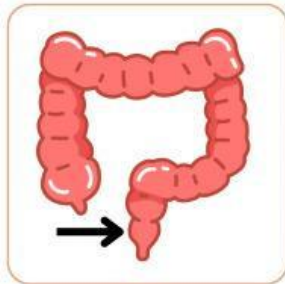
esophagus

large intestines

small intestines

Digestive System

Read the sentences, look at the pictures and choose the correct part of the digestive system.

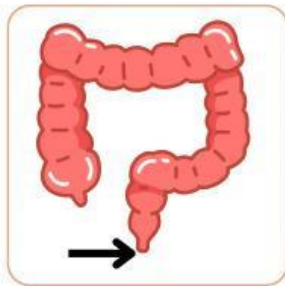


Where the waste passes through.

rectum

stomach

mouth



Where the waste exits the body

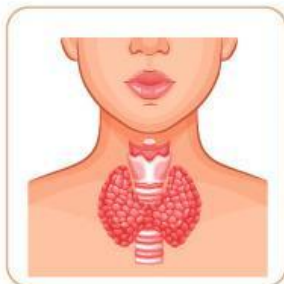
esophagus

anus

small intestine

Respiratory System

Read the sentences, look at the pictures and choose the correct part of the digestive system.



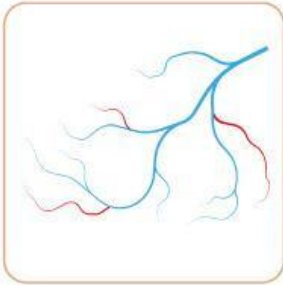
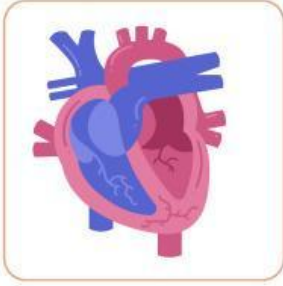
It is where the oxygen travels

trachea

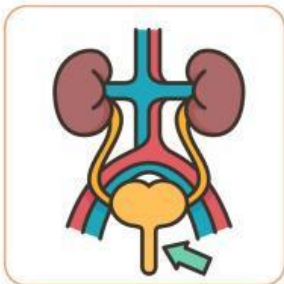
heart

bladder

Circulatory System



Excretory System



Body Systems

SYSTEMS

1.____Muscular System

2.____Excretory System

3.____Circulatory System

4.____Respiratory System

5.____Digestive System

6.____Skeletal System

FUNCTIONS

A. Helps us move

B. Processes nutrients from the body

C. Provides oxygen and removes carbon dioxide

D. Veins are an important part of this system

E. Helps clean the blood and remove toxins from the body

F. Gives support, protection and movement to the body